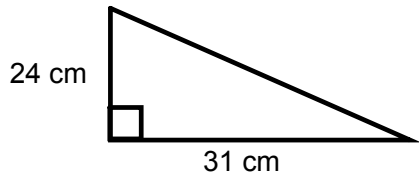
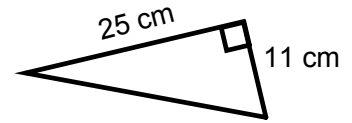


Math 9 *Pythagorean Theorem Review*

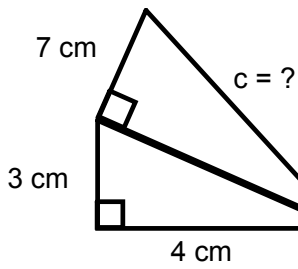
1.



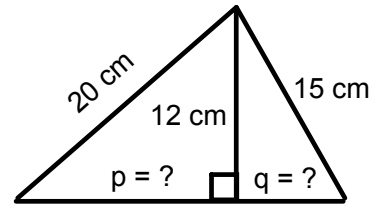
2.



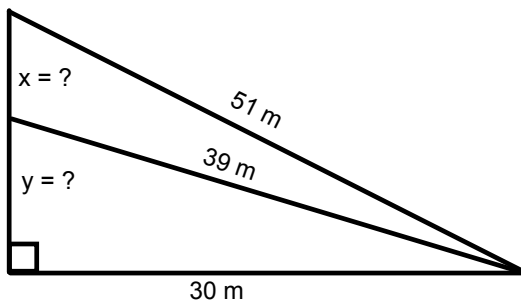
3.



4. Solve for p and q . Is the largest triangle a right triangle? Show how you could prove it.



6.



7. Calculate the longest pencil that could fit the following boxes:

