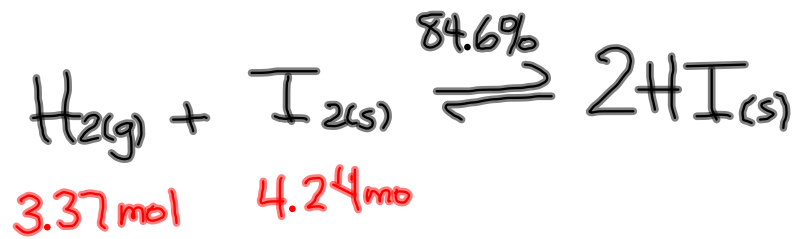


Homework - Worksheet



5.70 mol

exp.

If H₂ is L.R.

$$3.37 \text{ mol H}_2 \times \frac{2 \text{ mol HI}}{1 \text{ mol H}_2} = 6.74 \text{ mol HI}$$

If I₂ is L.R.

$$4.24 \text{ mol I}_2 \times \frac{2 \text{ mol HI}}{1 \text{ mol I}_2} = 8.48 \text{ mol HI}$$

∴ H₂ is L.R.

$$\% \text{rxn} = \frac{\text{exp.}}{\text{theor.}} \times 100\%$$

$$= \frac{5.70 \text{ mol}}{6.74 \text{ mol}} \times 100\%$$

$$\% \text{rxn} = 84.6\%$$

Equilibrium Law

Equilibrium Constant (K) - analysis of the experiments reveals a mathematical relationship that provides a constant value for a chemical system over a range of concentrations.

This constant value is called the equilibrium constant (K) for the reaction system.

EQUILIBRIUM LAW

The Equilibrium Law is applied to calculate K:

For the reaction: $aA + bB \rightleftharpoons cC + dD$

$$K = \frac{[C]^c[D]^d}{[A]^a[B]^b}$$

A,B,C,D are chemical entities and a,b,c,d are their coefficients in the balanced equation.

The greater the value of the equilibrium constant, the more the system will favor the forward reaction.

The greater the value of K, the greater the percent reaction.

$K > 1$ is a product-favoured reaction

$K < 1$ is a reactant-favoured reaction

Sample Problem

Write the equilibrium law for the reaction of nitrogen monoxide gas with oxygen gas to form nitrogen dioxide gas.

(1) equation:



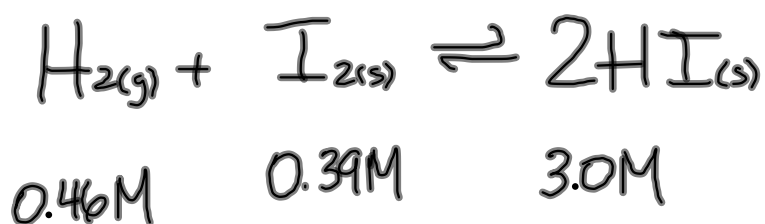
(2) balance:

(3) write equilibrium expression:

$$K = \frac{[\text{NO}_{2(g)}]^2}{[\text{NO}_{(g)}]^2 [\text{O}_{2(g)}]}$$

Sample Problem

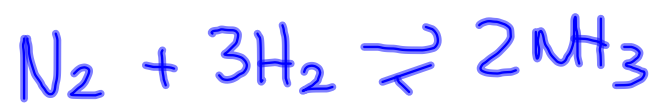
A mixture of H_2 and I_2 is allowed to react at 448°C . When the equilibrium is established the concentrations of the participants are found to be $[\text{H}_2] = 0.46 \text{ mol/L}$, $[\text{I}_2] = 0.39 \text{ mol/L}$, and $[\text{HI}] = 3.0 \text{ mol/L}$. Calculate the value of K_{eq} at 448°C from these data.



$$K = \frac{[\text{HI}_{(s)}]^2}{[\text{H}_{2(g)}][\text{I}_{2(s)}]}$$

$$K = \frac{[3.0]^2}{[0.46][0.39]}$$

$$K = 50.$$



$$K = \frac{[\text{NH}_3]^2}{[\text{N}_2][\text{H}_2]^3}$$

Worksheet