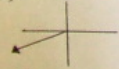


④ a) $45^\circ \rightarrow -315^\circ, -675^\circ$ b) $120^\circ \rightarrow -240^\circ, -600^\circ$

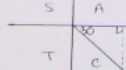
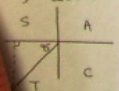
⑤ a) $-45^\circ \rightarrow 315^\circ, 675^\circ$ b) $-60^\circ \rightarrow 240^\circ, 600^\circ$

⑥ a) $-510^\circ \rightarrow$ Principal Angle = 210°



⑦ a) $\cos 205^\circ = -\frac{1}{10} = \frac{\sqrt{10}}{10}$

b) $\cot 330^\circ = \frac{\sqrt{3}}{1} = \sqrt{3}$



Austin L
Jersey #