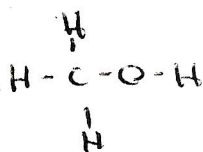
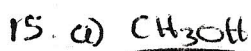
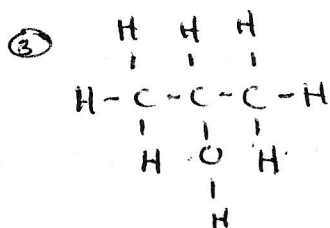
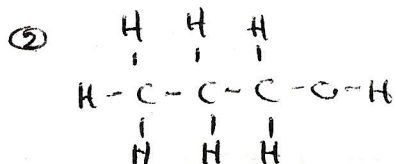
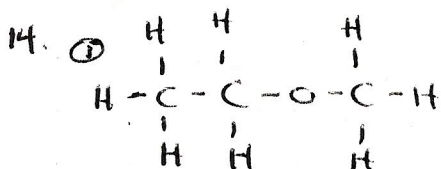


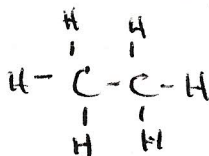
# ORGANIC CHEM - EXAM REVIEW

## Chapter 9

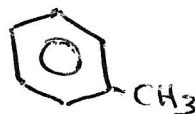
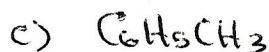
13. Study of all compounds containing carbon.



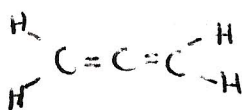
alcohol  
methanol



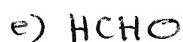
alkane  
ethane



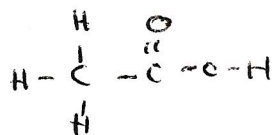
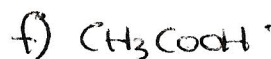
aromatic  
methylbenzene



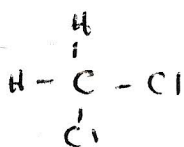
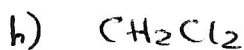
propadiene  
alkene



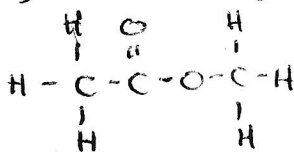
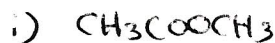
methanal  
aldehyde



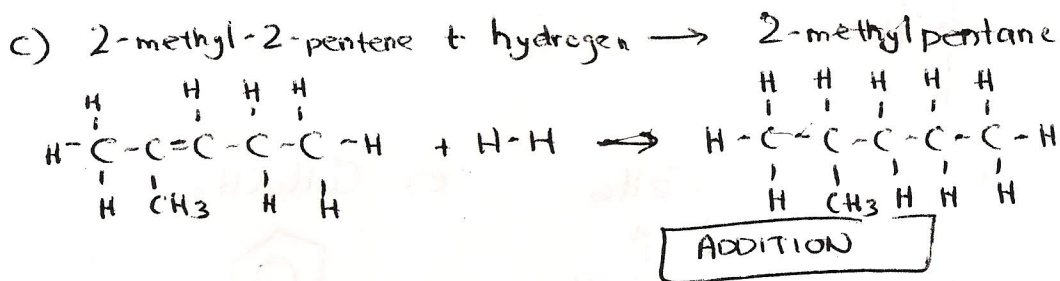
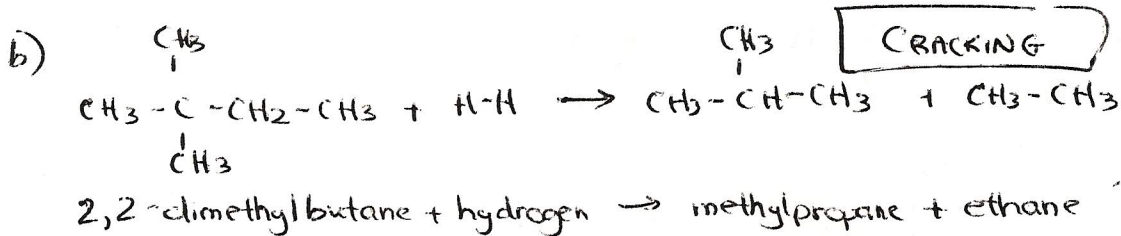
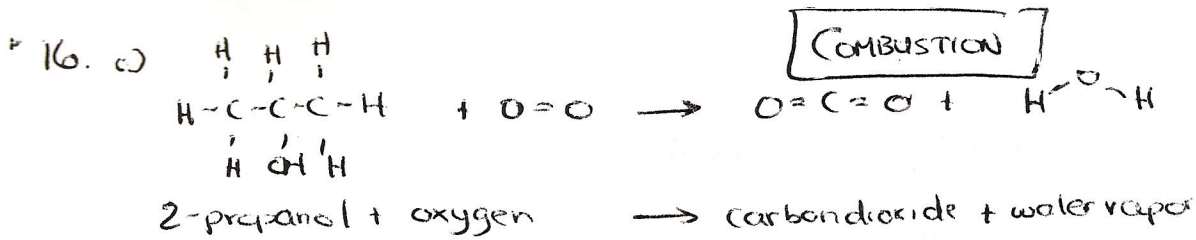
ethanoic acid  
carboxylic acid



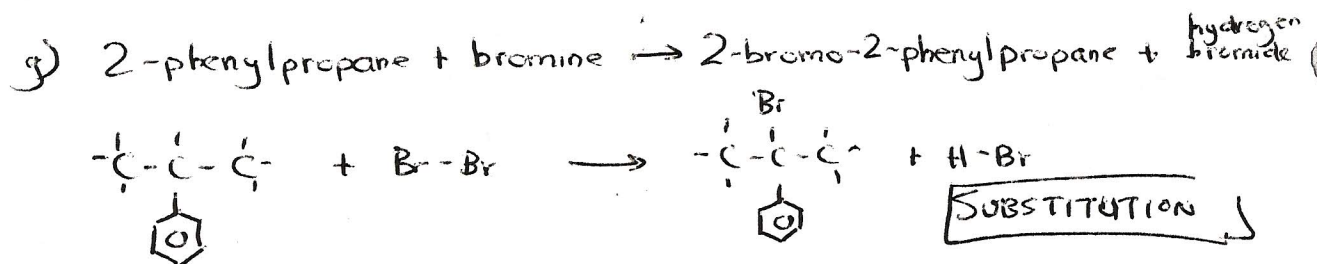
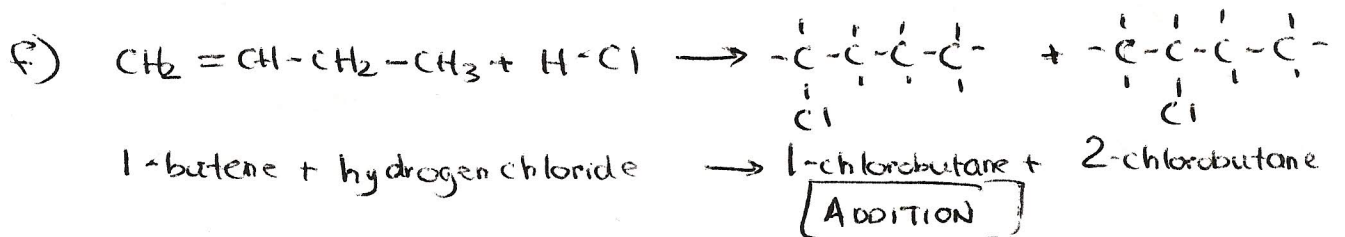
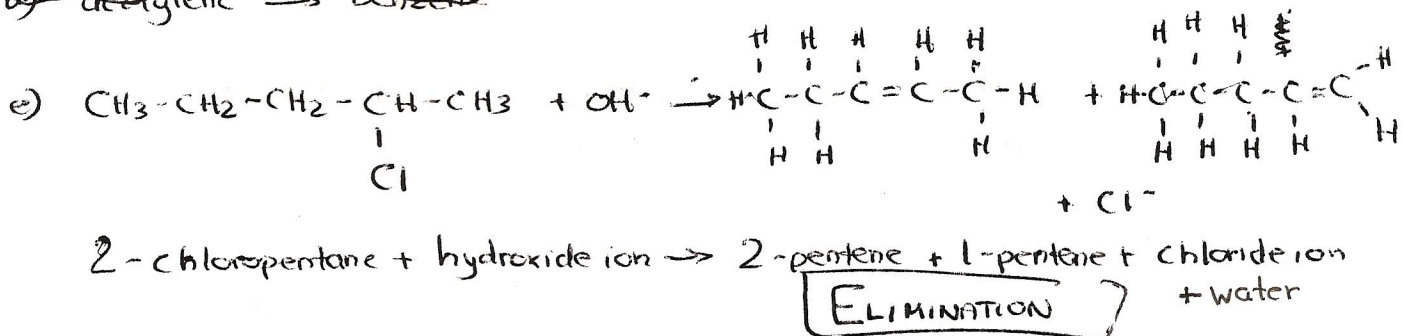
dichloromethane  
organic halide



methyl ethanoate  
ester

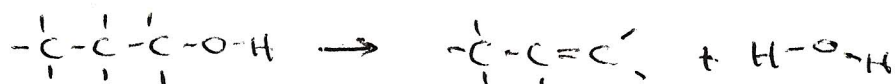


d) ~~acetylene  $\rightarrow$  benzene~~




h) 1-propanol  $\rightarrow$  propene + water

ELIMINATION



i) butanoic acid + methanol  $\rightarrow$  methyl butanoate + water



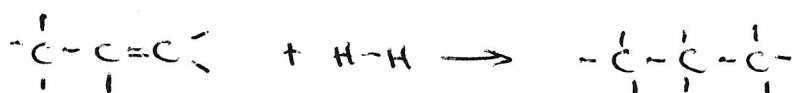
ESTERIFICATION

\* 17. A large structure with a large molecular mass, containing many repeating units called monomers.

B 1. a)  $\text{CH}_3\text{CH}_2\text{COOH} + \text{CH}_3\text{CH}_2\text{OH} \rightarrow$



b)  $\text{CH}_3\text{CH}=\text{CH}_2 + \text{H}_2 \rightarrow \text{CH}_3\text{CH}_2\text{CH}_3$



c)  $\text{CH}_3\text{Cl} + \text{Cl}_2 \rightarrow \text{CH}_2\text{Cl}_2 + \text{HCl}$



d)  $\text{CH}_3(\text{CH}_2)_{10}\text{CH}_3 + \text{H}_2 \rightarrow \text{CH}_3(\text{CH}_2)_3\text{CH}_3 + \text{CH}_3(\text{CH}_2)_6\text{CH}_3$

B. 2. a) Benzene + bromine  $\rightarrow$  bromobenzene + hydrogen bromide



b) Ethanol + methanoic acid  $\rightarrow$  ethyl methanoate + water



Review Problems

- 1 a) 3,4-dimethylhexane
- b) 2,2,3-trimethylpentane
- c) 2,2-dimethylbutane
- d) diethylhexane

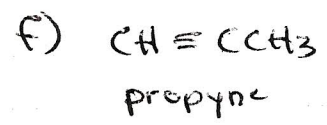

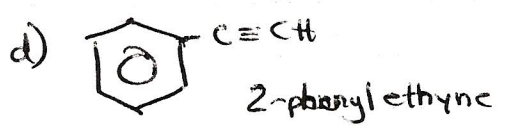
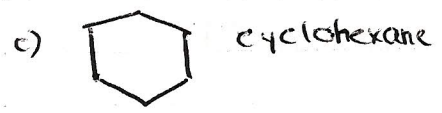
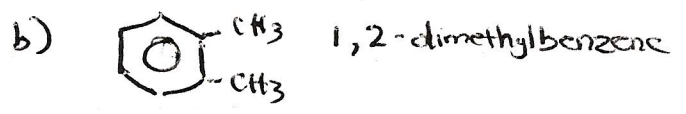
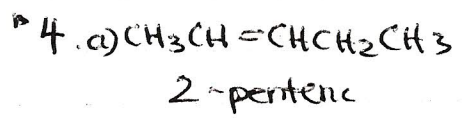
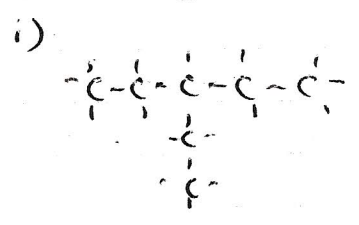
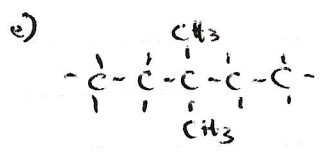
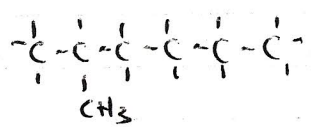
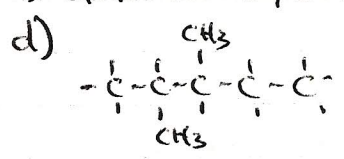
- e) 2,3,4-trimethylhexane
- f) 3,4,5-trimethylheptane
- g) 3,4,5-trimethylheptane
- h) 2,3,4-trimethylhexane

- 2 a) 2-methylpentane
- b) methylbutane
- c) 2,3-dimethylpentane
- g) 3-methylpentane

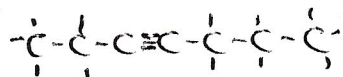
- d) ethylpentane
- e) 2,4-dimethylpentane
- f) 2,3-dimethylpentane
- h) 2,3-dimethylpentane

- 3 a) heptane
- b) 2,4-dimethylpentane
- c) 2,2,3-trimethylbutane

- f) 3-methylhexane
- g) 2,2-dimethylpentane



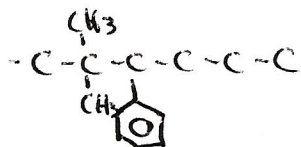
5 a) 3-heptyne



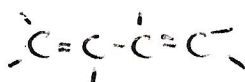
b) cyclopentene



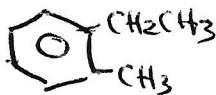
c) 3-phenyl-2,2-dimethylhexane



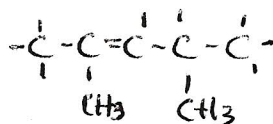
d) 1,3-butadiene



e) 1-ethyl-2-methylbenzene

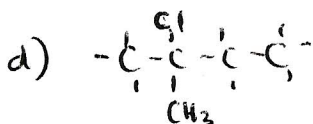
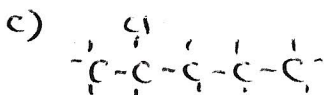


f) 2,4-dimethyl-2-pentene



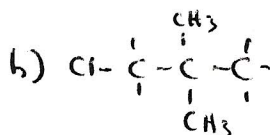
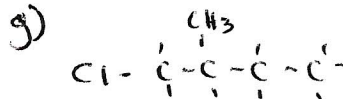
6 a) 1-chloropentane

b) 1-chloro-3-methylbutane



e) 3-chloropentane

f) 2-chloro-3-methylbutane



7 a) 1-bromo-3-ethyl-3-methylpentane

b) 3-methyl-1,4-pentadiene

c) 4,4-dimethyl-1-butene

d) chlorobenzene

e) 2-pentene

f) methyl-2-butene

g) 1-butene

h) 4-methyl-2-butene

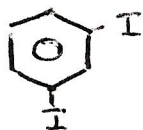
i) 2,3-dimethyl-2-pentene

j) 2,4-dimethyl-1,4-pentadiene

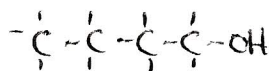
k) 2,3,3-trimethyl-1,4-hexadiene



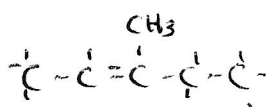
g) 1,3-diodobenzene



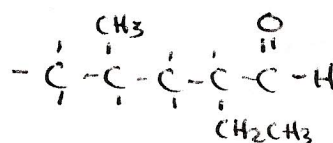
i) 1-butanol



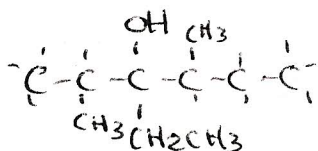
j) 3-methyl-2-pentene



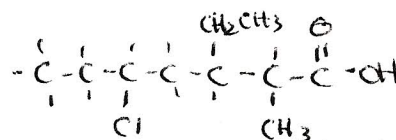
k) 2-ethyl-4-methylpentanal



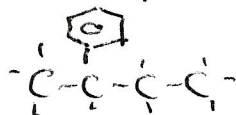
l) 3-ethyl-2,4-dimethyl-3-hexanol



m) 5-chloro-3-ethyl-2-methylheptanoic acid



n) 2-phenylbutane



\*2 a) 2-methyl-3-pentanol

b) 2-methyl-3-pentanone

c) 3-methyl-1-butene

d) butanal

e) 4,4-dimethyl-1-propanol

f)

\*3 a) 1-chloro-2-methylbutane

b) 1-bromo-2,3,3-trimethylbutane

c) bromocyclopropane

d) 3-chloropentane

e) 2-butanol

f) 3-bromo-2-pentene

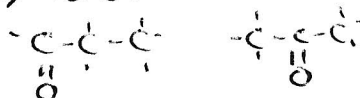
g) pentane

h) butanone

\*4 a)  $\text{C}_2\text{H}_6\text{O}$ 

dimethylether

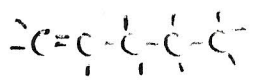
ethanol

b)  $\text{C}_3\text{H}_6\text{O}$ 

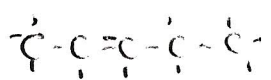
propanal

propanone

#4. c) C<sub>5</sub>H<sub>10</sub>



1-pentene



2-pentene

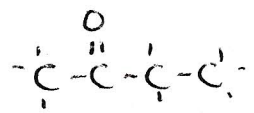
#5 a) ethanal



b) cyclobutane



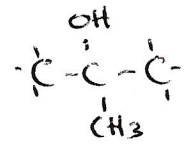
b) 2-butanone



i) cyclohexene

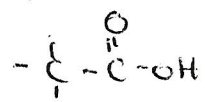


c) 2-methyl-2-propanol

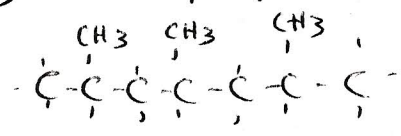


j)

d) ethanoic acid



e) trimethylheptane

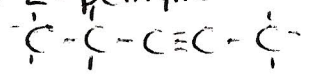


\* many possibilities

f) propene



g) 2-pentyne





## Review Organic Chemistry Ch. 9

