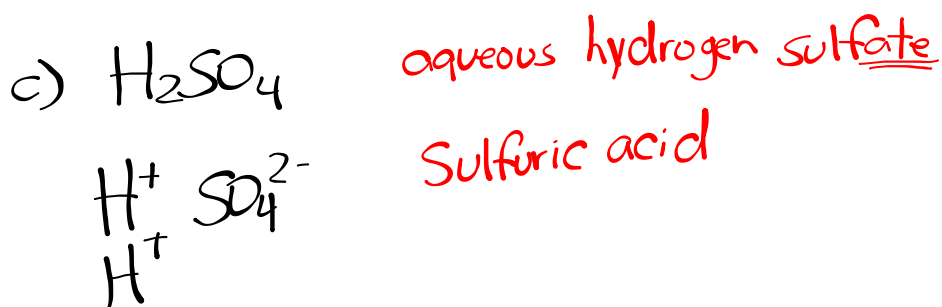

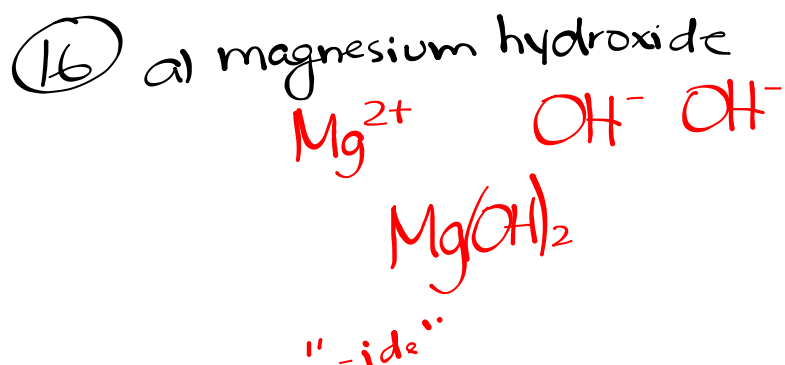
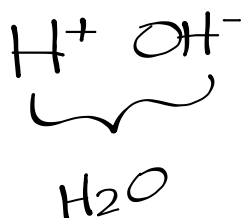


Homework

Acids and Bases Worksheet



Identify each of the following as an acid, base, ionic compound or molecular compound.

Unknown	SATP State	Solution Conductivity	Litmus Test
A	solid	yes	red to blue
B	liquid	no	no change
C	gas	yes	blue to red
D	solid	yes	no change

Identify each unknown as NH_3 , $\text{Ba}(\text{OH})_2$, NaNO_3 or HCl .

Compounds Worksheet

Review Questions p. 281-282

43-61, 65-71