

yellow = positive

red = negative

Warm Up

Write the polynomial for the following algebra tiles.



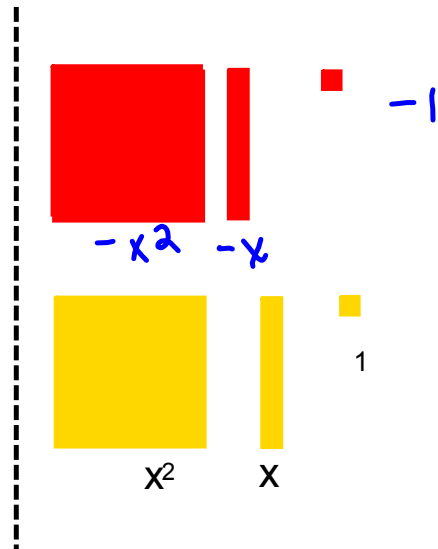
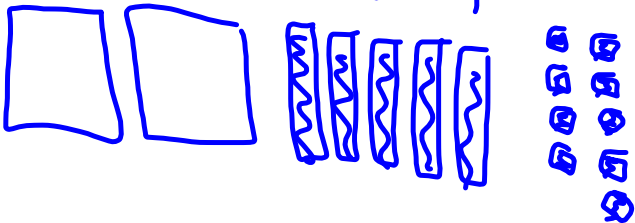
$$-3x^2 - 1x + 6$$



Model the following Polynomial


$$-5x + 2x^2 - 9$$

$$2x^2 - 5x - 9$$




ALGEBRA TILES

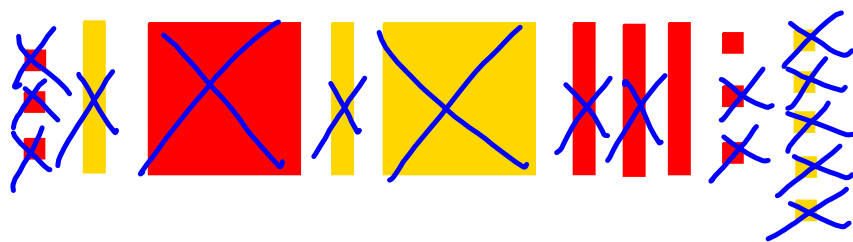
Here is a collection of tiles, lets group them together into "like terms".



$$x^2 + x - 3$$



$$-x^2 + x + 2$$



- X - |

Course Outline Grade 9 2010-2011 Second Semester.docx