

Let's Review:

- Simplifying Radicals
- Pythagoras Theorem
- Basic Trigonometric Properties

Radical Review

Simplify

$$\sqrt{12}$$
$$\sqrt{\underline{2 \cdot 2} \cdot 3}$$

$$2\sqrt{3}$$

$$5\sqrt{27}$$
$$5\sqrt{\underline{3 \cdot 3} \cdot 3}$$

$$15\sqrt{3}$$

$$5\sqrt{8} + 4\sqrt{18}$$

$$5\sqrt{\underline{2 \cdot 2} \cdot 2} + 4\sqrt{\underline{3 \cdot 3} \cdot 2}$$

$$10\sqrt{2} + 12\sqrt{2}$$

$$22\sqrt{2}$$

Radicals

$$\textcircled{1} \quad 5\sqrt{3} + \sqrt{3} = 6\sqrt{3}$$

$$\textcircled{2} \quad 5\sqrt{3} + \sqrt{2}$$

$$\textcircled{3} \quad 10\sqrt{2} - 8\sqrt{2} = 2\sqrt{2}$$

$$\textcircled{4} \quad \underline{2\sqrt{3}} \cdot \underline{5\sqrt{2}} = \underline{10\sqrt{6}}$$

$$\textcircled{5} \quad \sqrt{3} \cdot 5 = 5\sqrt{3}$$

$$\textcircled{6} \quad \underline{2\sqrt{3}} \cdot \underline{5\sqrt{3}} = \underline{10\sqrt{9}} = 10(3) = 30$$

Rationalizing the Denominator (Get rid of the radical)

$$\frac{5\sqrt{2}}{\sqrt{2}\sqrt{2}} = \frac{5\sqrt{2}}{\sqrt{4}} = \boxed{\frac{5\sqrt{2}}{2}}$$

$$\frac{8\sqrt{2}\sqrt{8}}{6\sqrt{8}\sqrt{8}} = \frac{8\sqrt{16}}{6\sqrt{64}}$$

$$= \frac{8(4)}{6(8)}$$

$$= \frac{32}{48}$$

$$= \boxed{\frac{2}{3}}$$

Think Conjugates!

$$\begin{array}{l} (8 - \sqrt{2})(2 + \sqrt{5}) \\ (2 - \sqrt{5})(2 + \sqrt{5}) \end{array}$$

Conjugate

$$\begin{array}{l} 1 + \sqrt{5} \rightarrow 1 - \sqrt{5} \\ 1 - \sqrt{5} \rightarrow 1 + \sqrt{5} \\ -1 + \sqrt{3} \rightarrow -1 - \sqrt{3} \end{array}$$

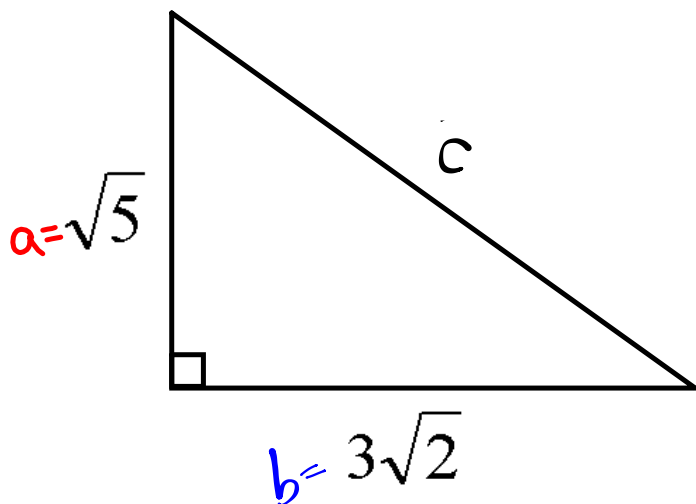
$$\frac{16 + 8\sqrt{5} - 2\sqrt{2} - \sqrt{10}}{4 + 2\sqrt{5} - 2\sqrt{5} - 5}$$

$$\frac{16 + 8\sqrt{5} - 2\sqrt{2} - \sqrt{10}}{-1}$$

$$\boxed{-16 - 8\sqrt{5} + 2\sqrt{2} + \sqrt{10}}$$

Think Pythagorean Theorem!

Determine the length of the indicated side!



$$(\sqrt{5})(\sqrt{5}) = \sqrt{25} = 5$$

$$(3\sqrt{2})(3\sqrt{2}) = 9\sqrt{4} = 9(2) = 18$$

$$a^2 + b^2 = c^2$$

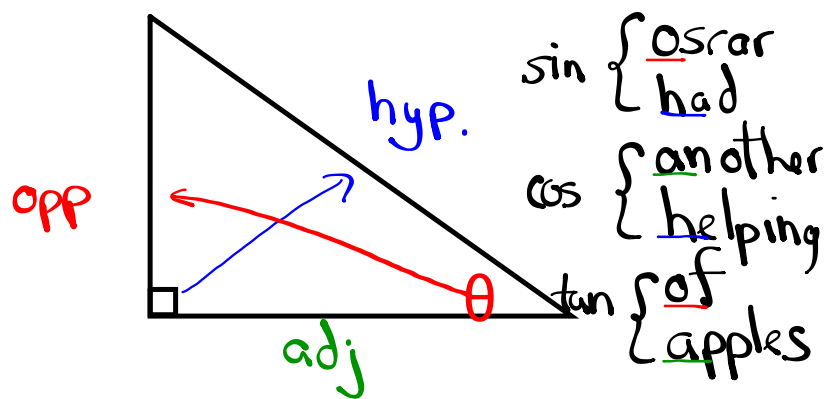
$$(\sqrt{5})^2 + (3\sqrt{2})^2 = c^2$$

$$5 + 18 = c^2$$

$$23 = c^2$$

$$\sqrt{23} = c$$

Trigonometric Ratios



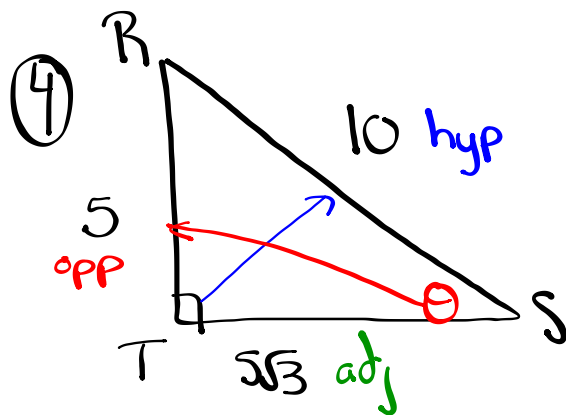
$\sin \theta = \frac{\text{opp}}{\text{hyp}}$	$\cos \theta = \frac{\text{adj}}{\text{hyp}}$	$\tan \theta = \frac{\text{opp}}{\text{adj}}$
$\csc \theta = \frac{\text{hyp}}{\text{opp}}$	$\sec \theta = \frac{\text{hyp}}{\text{adj}}$	$\cot \theta = \frac{\text{adj}}{\text{opp}}$

↑
cosecant

↑
secant

↑
cotangent

Homework



$$\sin \theta = \frac{5}{10} = \frac{1}{2}$$

$$\cos \theta = \frac{5\sqrt{3}}{10} = \frac{\sqrt{3}}{2}$$

$$a^2 + b^2 = c^2$$

$$(5)^2 + b^2 = (10)^2$$

$$25 + b^2 = 100$$

$$b^2 = 75$$

$$b = \sqrt{75}$$

$$b = \sqrt{5 \cdot 5 \cdot 3}$$

$$b = 5\sqrt{3}$$

Attachments

Trig&3SpaceCourseOutline.doc