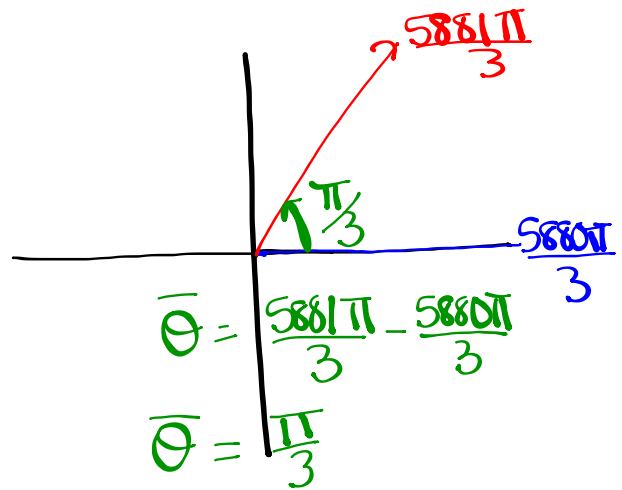


Sketch the following and determine a negative angle co-terminal with:

$$(i) \frac{5881\pi}{3}$$

$$\frac{5880\pi}{3}, \frac{5881\pi}{3}, \frac{5882\pi}{3}$$

$$1960\pi$$



Negative coterminal angle:

$$\frac{5881\pi}{3} - \frac{1962\pi}{1}$$

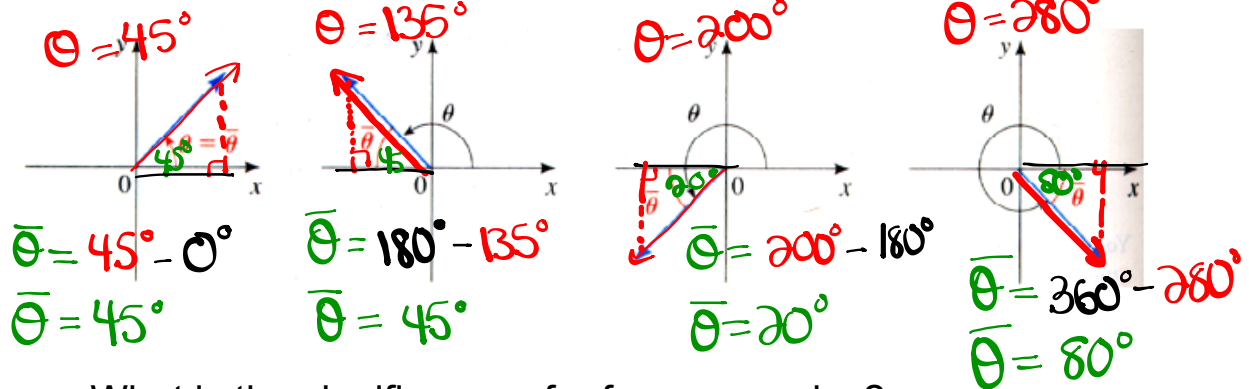
$$\frac{5881\pi}{3} - \frac{5886\pi}{3}$$

$$\frac{-5\pi}{3}$$

Reference Triangles:

Definition 17 The reference angle $\bar{\theta}$ of an angle θ in standard position is the acute angle (between 0 and 90°) the terminal side makes with the x-axis.

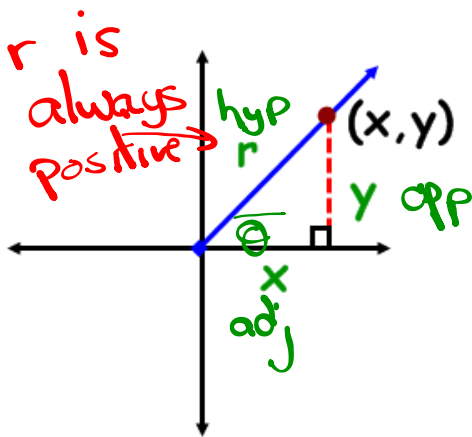
The picture below illustrates this concept.



What is the significance of reference angles?

Angles on the Cartesian Plane

- **Reference Angle** - an acute angle formed between the terminal arm and the **x-axis**.
- **Reference Triangle** - a triangle formed by drawing a perpendicular line from a point on the terminal to the **x-axis**.



Notice what will happen if the rotation moves into other quadrants?

TRIG RATIOS on the CARTESIAN PLANE

$$\sin \theta = \frac{y}{r} = \frac{o}{h} \quad \csc \theta = \frac{r}{y} = \frac{h}{o}$$

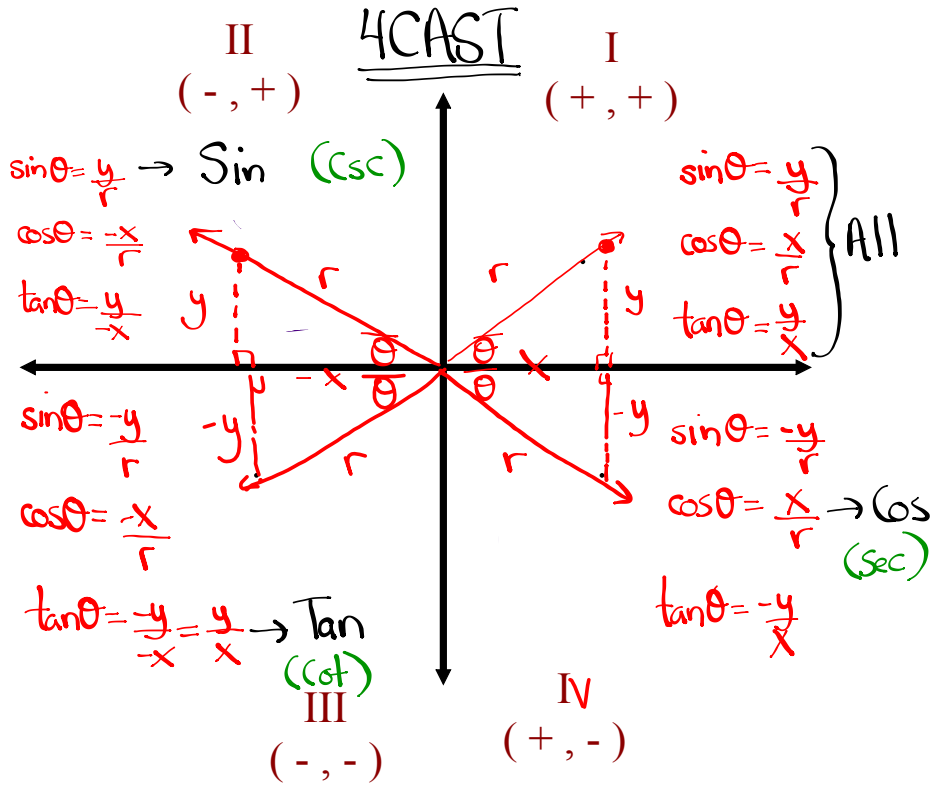
$$\cos \theta = \frac{x}{r} = \frac{a}{h} \quad \sec \theta = \frac{r}{x} = \frac{h}{a}$$

$$\tan \theta = \frac{y}{x} = \frac{o}{a} \quad \cot \theta = \frac{x}{y} = \frac{a}{o}$$

} }
"Primary" "Reciprocal"

TRIG RATIOS IN ALL 4 QUADRANTS

What primary trig ratios are **POSITIVE** in...



Where is θ if...

$\csc \theta < 0$
 $\sin \theta < 0$

S	A	Quad 3+4
T	C	

$\sin \theta < 0$ & $\tan \theta < 0$

S	A	Quad 4
T	C ✓	

$\csc \theta > 0$ & $\cot \theta < 0$
 $\sin \theta > 0$ + $\tan \theta < 0$

S ✓	A	Quad 2
T	C ✓	

Homework

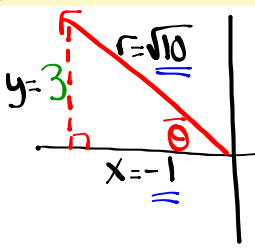
$\sin \theta > 0$ (S) | A
 $\cos \theta < 0$ (C) | C
 Quad 2

$\sec \theta < 0$ →

If $\sec \theta = -\sqrt{10}$ and $\sin \theta > 0$, determine the value of $\csc \theta = \frac{h}{o} = \frac{r}{y}$

$\sec \theta = -\frac{\sqrt{10}}{1} = \frac{\text{hyp}}{\text{adj}} = \frac{r}{x}$

$r = \sqrt{10}$ (always +)
 $x = -1$



① Find y :
 $x^2 + y^2 = r^2$
 $(-1)^2 + y^2 = (\sqrt{10})^2$
 $1 + y^2 = 10$
 $y^2 = 9$
 $y = \pm 3$
 $y = 3$ (Q2)

② $\csc \theta = \frac{\text{hyp}}{\text{opp}} = \frac{r}{y} = \frac{\sqrt{10}}{3}$

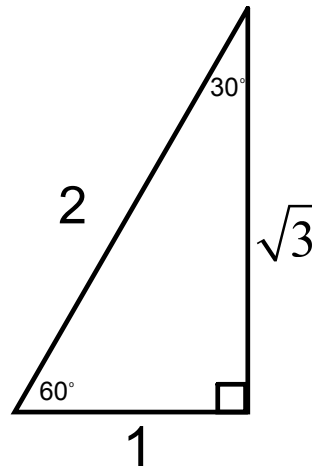
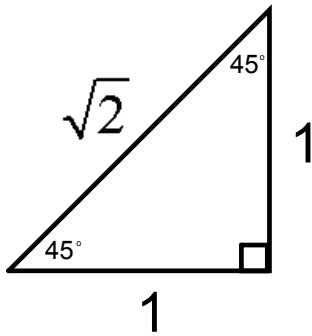
Determine the measure (in radians) of an angle whose terminal arm passes through the ordered pair ~~$(-2\sqrt{3}, 4)$~~

$x = -2\sqrt{3}$

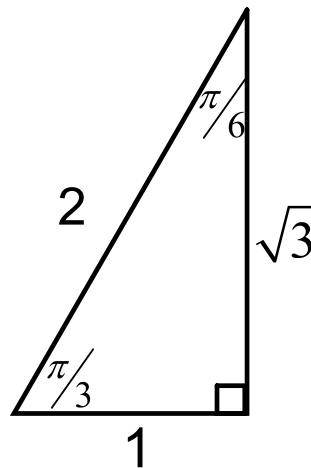
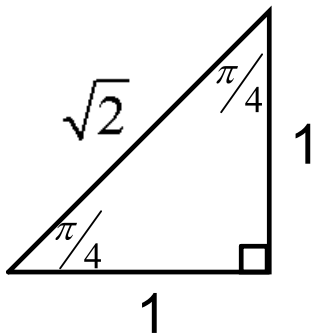
$y = -4$

Special Angles

In Degrees:

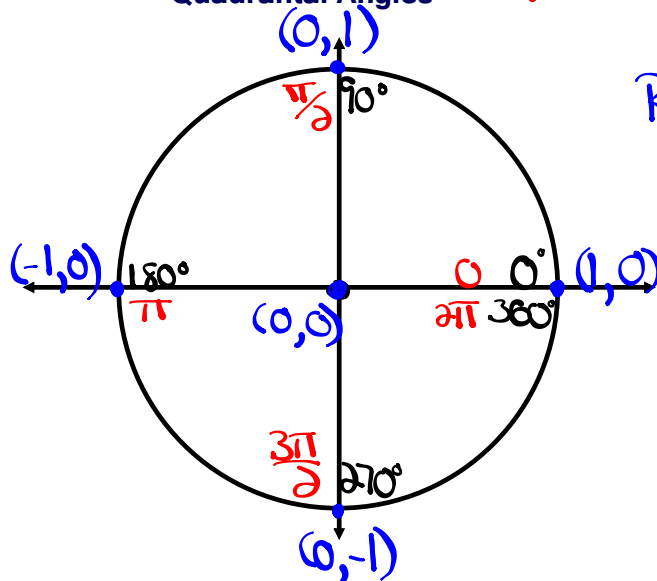


In Radians:



Quadrantal Angles

(Multiples of 90° or $\frac{\pi}{2}$ rads)

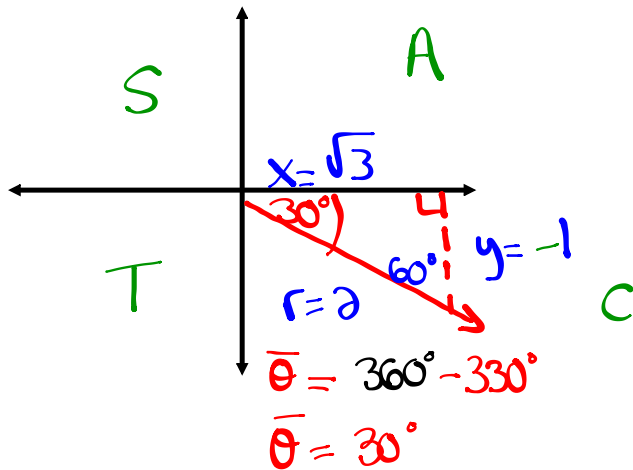


Radius = 1

$$690^\circ - 360^\circ = 330^\circ$$

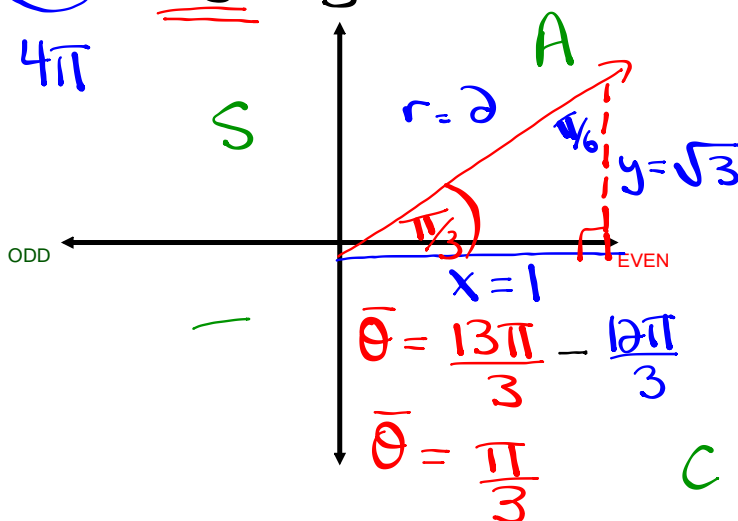
Solving Trig Expressions by Sketching Angles

Ex. Evaluate the $\sin 690^\circ = \sin 330^\circ = \frac{-1}{2}$



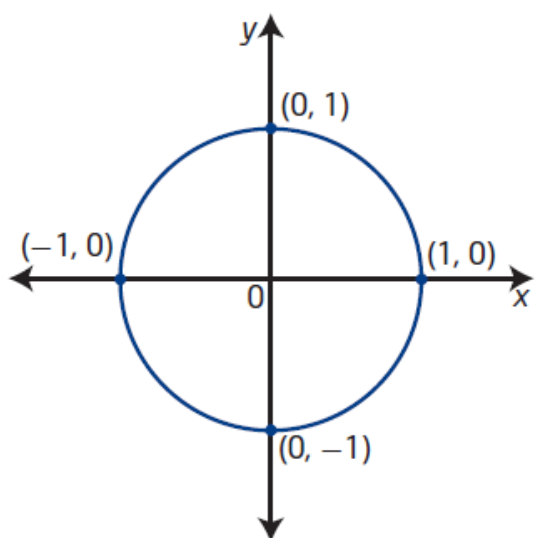
Ex. $\cos \frac{13\pi}{3} = \frac{1}{2}$

$\frac{12\pi}{3}, \frac{13\pi}{3}, \frac{14\pi}{3}$



1

Unit Circle



unit circle

- a circle with radius 1 unit ($r=1$)
- a circle of radius 1 unit with centre at the origin on the Cartesian plane is known as *the* unit circle

$$\sin \theta = \frac{o}{h} = \frac{y}{r} = \frac{y}{1} = y$$

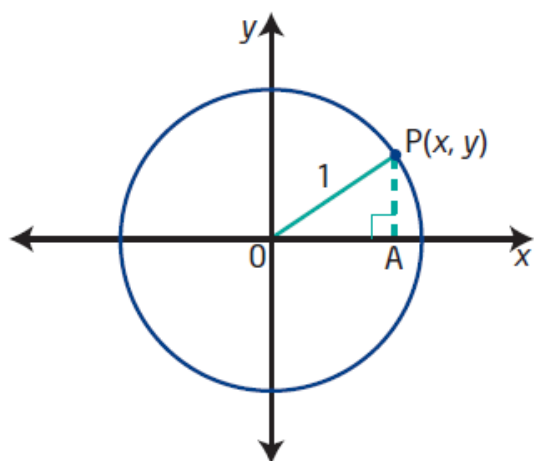
$$\cos \theta = \frac{a}{h} = \frac{x}{r} = \frac{x}{1} = x$$

$$\tan \theta = \frac{o}{a} = \frac{y}{x}$$

$$\csc \theta = \frac{1}{y}$$

$$\sec \theta = \frac{1}{x}$$

$$\cot \theta = \frac{x}{y}$$



$$r = 1$$

$$x^2 + y^2 = r^2$$

The equation of the unit circle is $x^2 + y^2 = 1$.

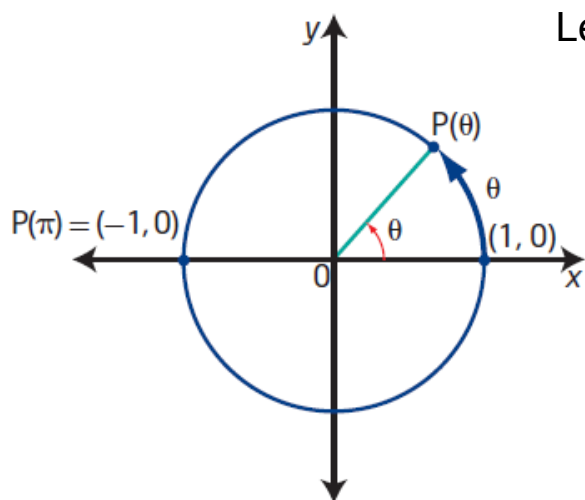
Determine the equation of a circle with centre at the origin and radius 6.

$$x^2 + y^2 = r^2$$

$$x^2 + y^2 = (6)^2$$

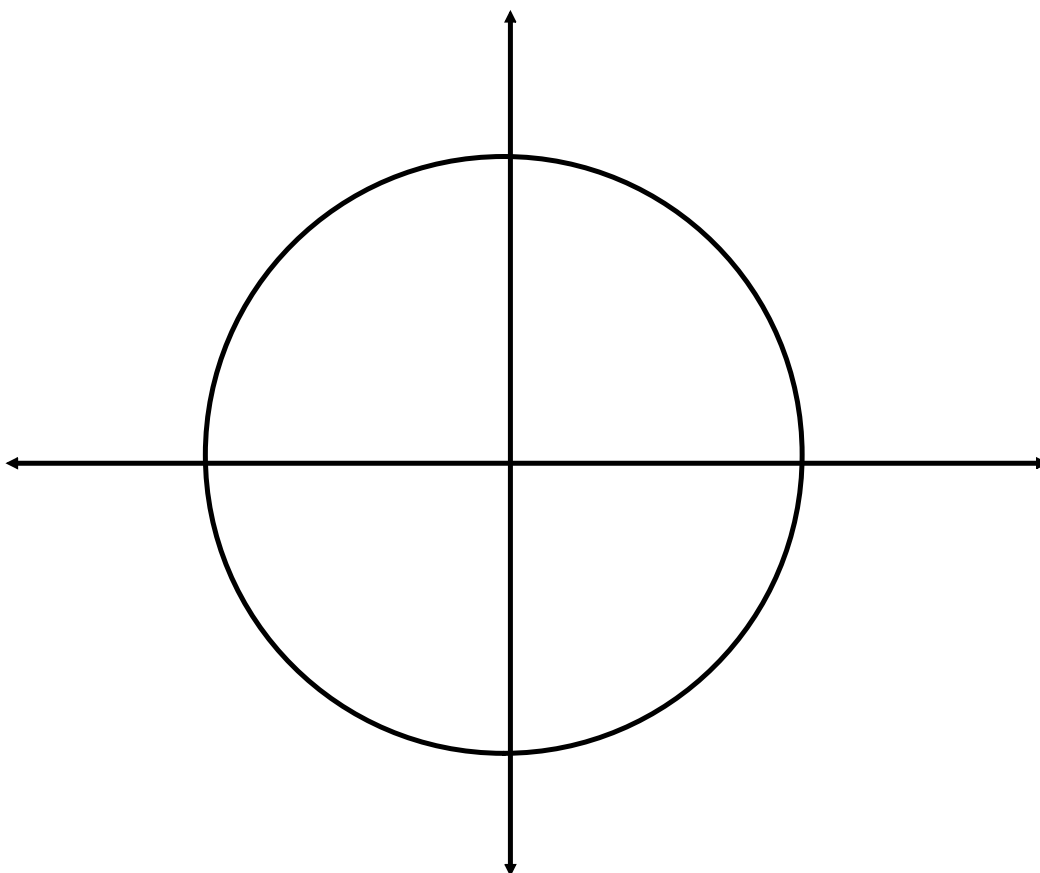
$$x^2 + y^2 = 36$$

Special Angles on the Unit Circle:

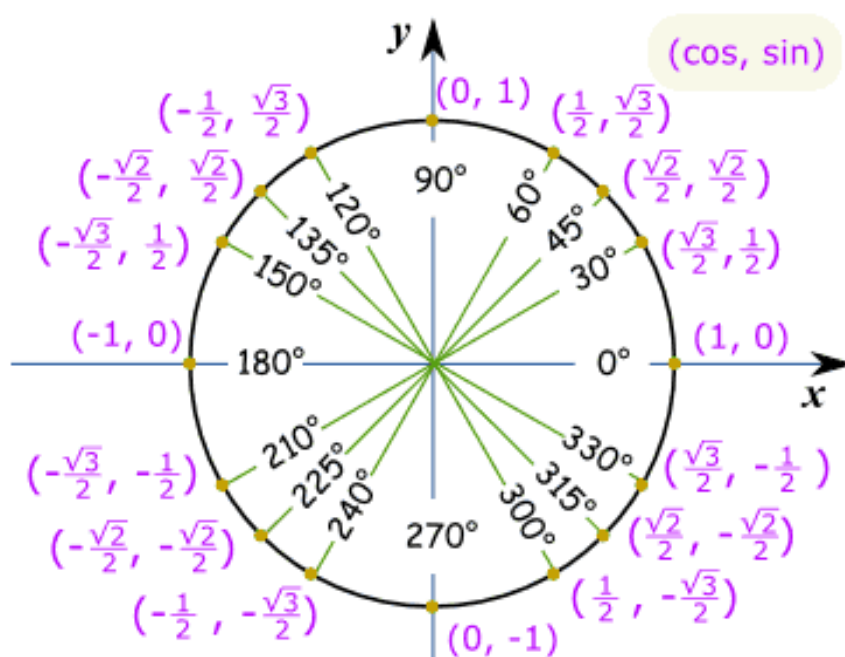


Let's use $\frac{\pi}{4}$ as our reference angle

Construct reference triangles
for all multiples of $\pi/4$
between 0 and 2π

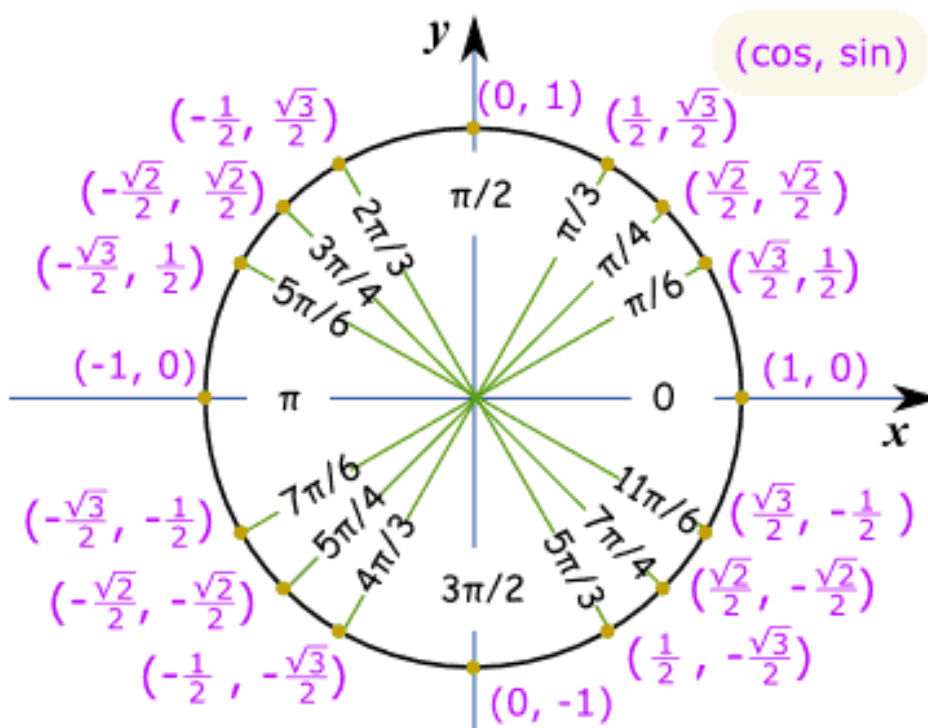


Unit Circle of Special Angles in Degrees



This is lovely...so what is it used for????

Unit Circle of Special Angles in Radians

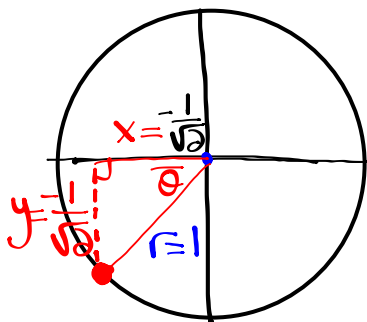


Problems Involving the Unit Circle:

Determine Coordinates for Points of the Unit Circle

Determine the coordinates for all points on the unit circle that satisfy the conditions given. Draw a diagram in each case.

- the y-coordinate is $-\frac{1}{\sqrt{2}}$ and the point is in quadrant III



$$x^2 + y^2 = r^2$$

$$x^2 + \left(\frac{-1}{\sqrt{2}}\right)^2 = (1)^2$$

$$x^2 + \frac{1}{2} = 1$$

$$x^2 = 1 - \frac{1}{2}$$

$$x^2 = \frac{2}{2} - \frac{1}{2}$$

$$x^2 = \frac{1}{2}$$

$$x = \pm \frac{\sqrt{1}}{\sqrt{2}}$$

$$x = \pm \frac{1}{\sqrt{2}}$$

$$x = -\frac{1}{\sqrt{2}} \text{ or } -\frac{\sqrt{2}}{2} \quad (\text{Quad 3})$$

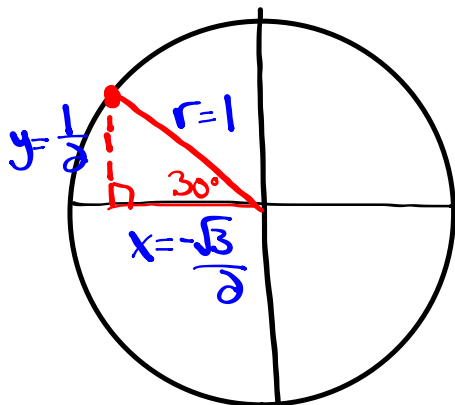
Coordinates are:

$$\left(-\frac{1}{\sqrt{2}}, -\frac{1}{\sqrt{2}}\right) \text{ or } \left(-\frac{\sqrt{2}}{2}, -\frac{\sqrt{2}}{2}\right)$$

Problems Involving the Unit Circle:

If $P(150^\circ)$ is the point at which the terminal arm of an angle θ in standard position intersects the unit circle, determine the exact coordinates of...

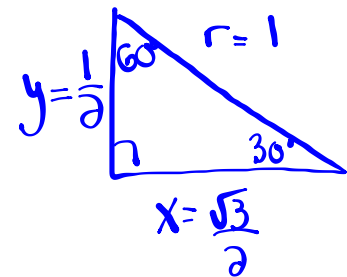
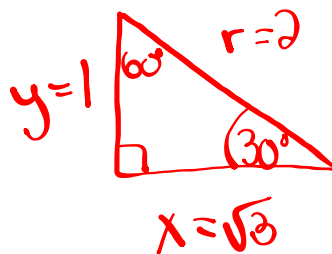
(x, y)



$$\bar{\theta} = 180^\circ - 150^\circ$$

$$\bar{\theta} = 30^\circ$$

We will have to scale the special triangle so that $r=1$



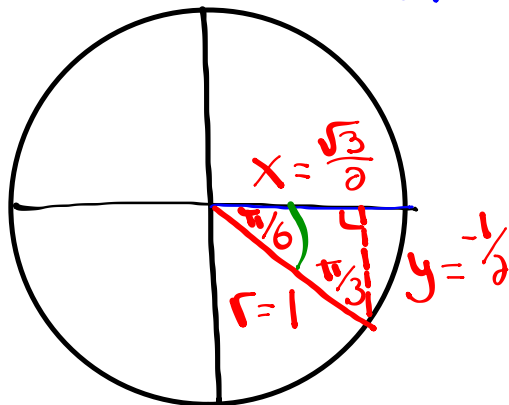
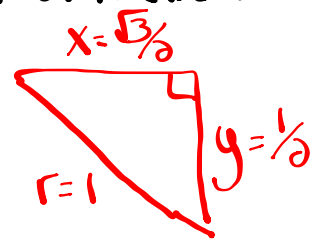
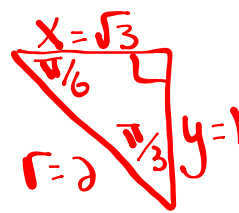
Coordinates are:

$$\left(-\frac{\sqrt{3}}{2}, \frac{1}{2}\right)$$

Questions from Homework

① c) $\frac{10\pi}{6}, \frac{11\pi}{6}, \frac{12\pi}{6}$
 2π

Scale to fit unit circle



Coordinates are:
 $(\frac{\sqrt{3}}{2}, -\frac{1}{2})$

$$\bar{\theta} = \frac{12\pi}{6} - \frac{11\pi}{6}$$

$$\bar{\theta} = \frac{\pi}{6}$$

Questions from Homework

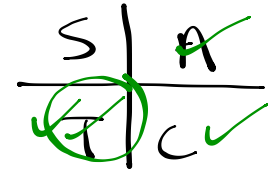
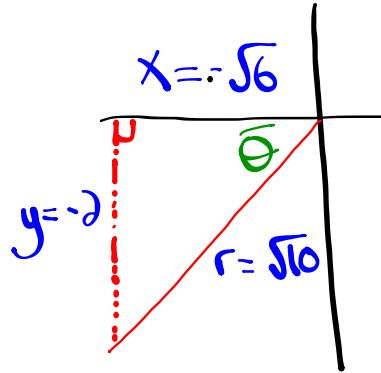
$$\textcircled{3} \quad \csc \theta = -\frac{\sqrt{10}}{2} \quad \text{and} \quad \tan \theta > 0$$

$$\sin \theta < 0$$

Given:

$$\text{hyp} = r = \sqrt{10}$$

$$\text{opp} = y = -2$$



① Find x

$$x^2 + y^2 = r^2$$

$$x^2 + (-2)^2 = (\sqrt{10})^2$$

$$x^2 + 4 = 10$$

$$x^2 = 6$$

$$x = \pm \sqrt{6}$$

$$x = -\sqrt{6} \quad (\text{Q3})$$

$$\sin \theta = \frac{-2}{\sqrt{10}} = \frac{-2\sqrt{10}}{10} = \frac{-\sqrt{10}}{5}$$

$$\cos \theta = \frac{-\sqrt{6}}{\sqrt{10}} = \frac{-\sqrt{60}}{10} = \frac{-2\sqrt{15}}{10} = \frac{-\sqrt{15}}{5}$$

$$\tan \theta = \frac{-2}{-\sqrt{6}} = \frac{2\sqrt{6}}{6} = \frac{\sqrt{6}}{3}$$

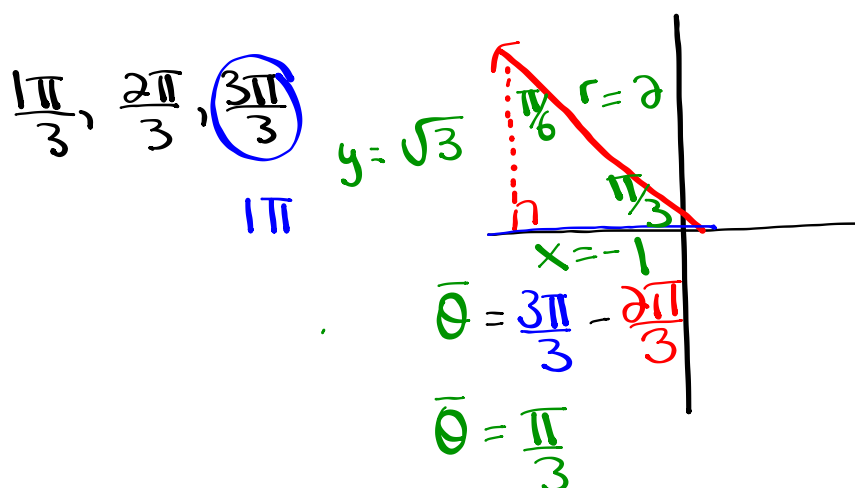
$$\csc \theta = -\frac{\sqrt{10}}{2} \quad (\text{Given})$$

$$\sec \theta = -\frac{\sqrt{10}}{\sqrt{6}} = -\frac{\sqrt{60}}{6} = \frac{-2\sqrt{15}}{6} = -\frac{\sqrt{15}}{3}$$

$$\cot \theta = \frac{-\sqrt{6}}{-2} = \frac{\sqrt{6}}{2}$$

Questions from Homework

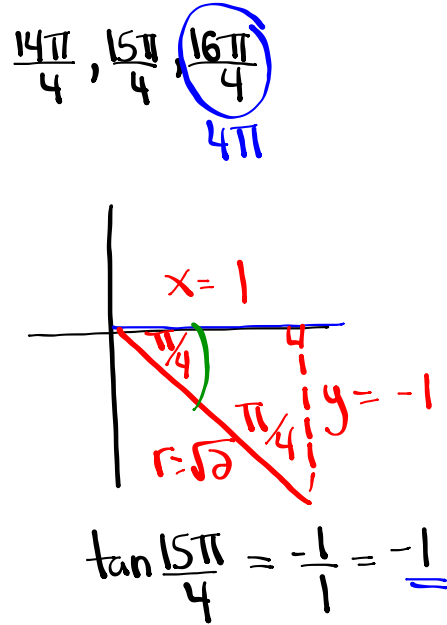
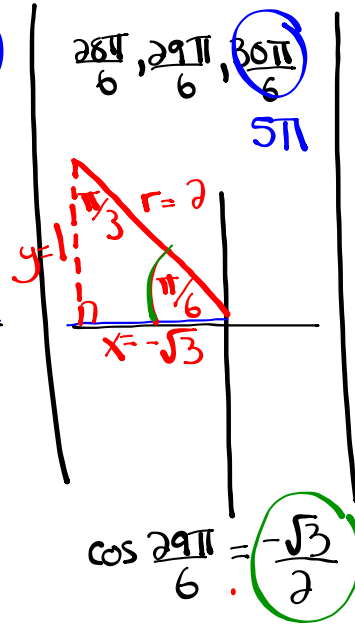
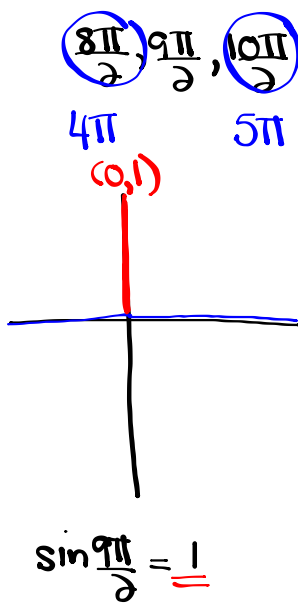
④ b) $\sec \frac{2\pi}{3} = \frac{a}{1} = -2$



Evaluate without the use of a calculator:

- ① Sketch angles
- ② Find θ
- ③ Fill in ref. triangle
- ④ Find trig ratio

$$\sin \frac{9\pi}{2} - \cos^2 \left(\frac{29\pi}{6} \right) \tan \left(\frac{15\pi}{4} \right)$$



$$\sin \frac{9\pi}{2} - \cos^2 \left(\frac{29\pi}{6} \right) \tan \left(\frac{15\pi}{4} \right)$$

$$(1) - \left(\frac{-\sqrt{3}}{2} \right)^2 (-1)$$

$$1 - \left(\frac{3}{4} \right) \left(\frac{-1}{1} \right) \rightarrow \text{or } 1 - \left(\frac{-3}{4} \right)$$

$$1 + \frac{3}{4}$$

$$\frac{4}{4} + \frac{3}{4}$$

$$\frac{7}{4}$$

Evaluate without the use of a calculator:

$$\cos\left(\frac{16\pi}{3}\right) \tan^2\left(\frac{23\pi}{6}\right) + \csc\left(\frac{11\pi}{2}\right) + \sin^2\left(\frac{27\pi}{4}\right)$$

(Q3)
(Q4)
Border of 3 and 4
(Q2)

$$\left(-\frac{1}{2}\right) \left(-\frac{1}{\sqrt{3}}\right)^2 + \left(-\frac{1}{-1}\right) + \left(+\frac{1}{\sqrt{2}}\right)^2$$

$$-\frac{1}{2} \left(\frac{1}{3}\right) + (-1) + \frac{1}{2}$$

$$-\frac{1}{6} - 1 + \frac{1}{2}$$

$$-\frac{1}{6} - \frac{6}{6} + \frac{3}{6}$$

$$-\frac{4}{6}$$

-
2
/
3

Homework:

Worksheet - Sketching Angles in Radians.doc

Solutions...

1. $-\frac{5}{3}$

5. $\frac{4+3\sqrt{3}}{6}$

2. $\frac{-\sqrt{6}}{3}$

6. $\frac{-10}{3}$

3. $-2-\sqrt{3}$

7. 0

4. $\frac{-5}{3}$

8. $\frac{3+3\sqrt{3}}{-2}$

Attachments

Worksheet - Sketching Angles in Radians.doc