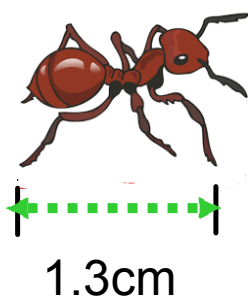


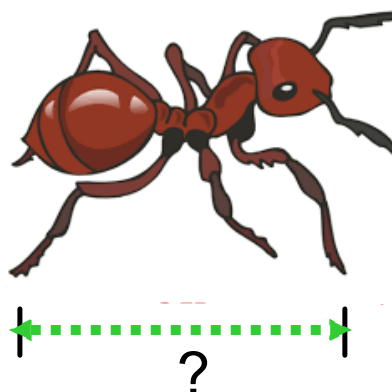
Warm Up

1. Calculate the length of the enlargement by a scale factor of 2.3.

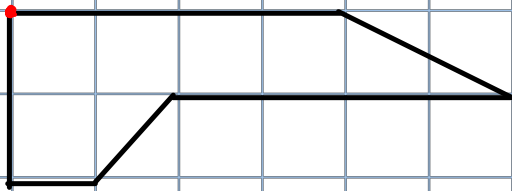
Original



Scale



Draw the scale diagram with scale of 2.5.



Draw the scale diagram with scale of $\frac{1}{2}$.

