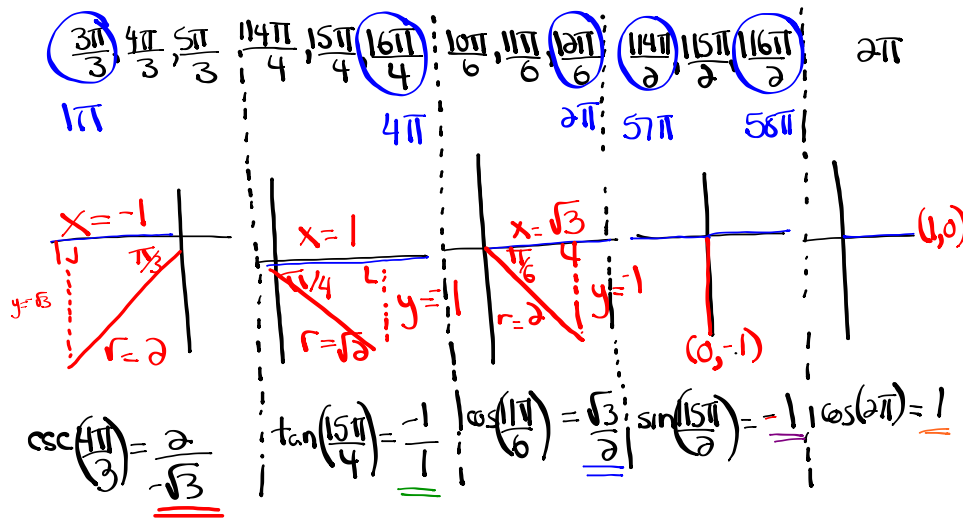


Questions from Homework

$$\textcircled{5} \quad \csc^2\left(\frac{4\pi}{3}\right) \tan\left(\frac{15\pi}{4}\right) + \cos\left(\frac{-13\pi}{6}\right) - \sin\left(\frac{115\pi}{2}\right) + \cos(-14\pi)$$

$\frac{-13\pi + 24\pi}{6} = \frac{11\pi}{6}$ $-14\pi + 16\pi = 2\pi$

$$\csc^2\left(\frac{4\pi}{3}\right) \tan\left(\frac{15\pi}{4}\right) + \cos\left(\frac{11\pi}{6}\right) - \sin\left(\frac{115\pi}{2}\right) + \cos(2\pi)$$



$$\csc^2\left(\frac{4\pi}{3}\right) \tan\left(\frac{15\pi}{4}\right) + \cos\left(\frac{11\pi}{6}\right) - \sin\left(\frac{115\pi}{2}\right) + \cos(2\pi)$$

$$\left(\frac{-2}{\sqrt{3}}\right)^2 (-1) + \left(\frac{\sqrt{3}}{2}\right) - (-1) + (1)$$

$$\left(\frac{4}{3}\right)(-1) + \frac{\sqrt{3}}{2} + 1 + 1$$

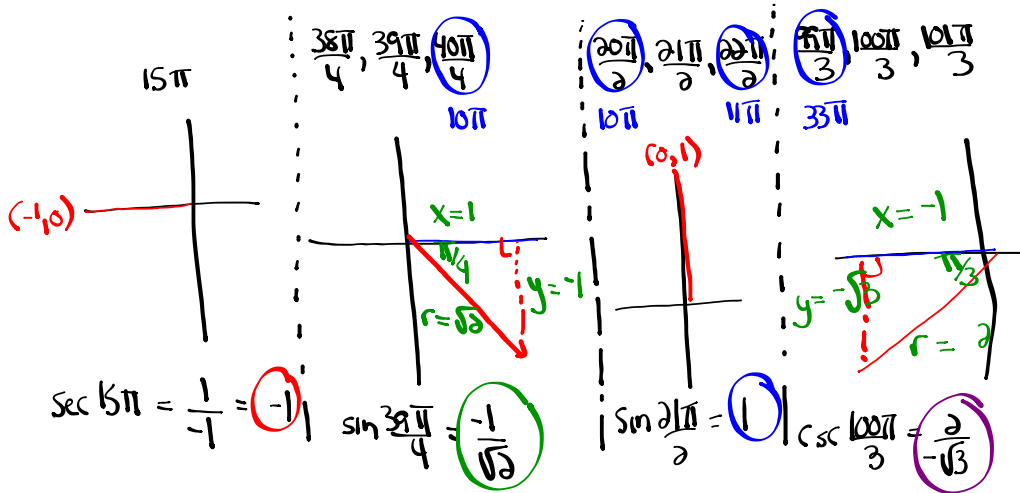
$$-\frac{4}{3} + \frac{\sqrt{3}}{2} + \frac{2}{1}$$

$$-\frac{8}{6} + \frac{3\sqrt{3}}{6} + \frac{12}{6}$$

$$\boxed{\frac{4 + 3\sqrt{3}}{6}} \quad \text{or} \quad \frac{3\sqrt{3} + 4}{6}$$

Questions from Homework

6) $\sec 15\pi + \sqrt{2} \sin \frac{39\pi}{4} \sin \frac{2\pi}{2} - \csc^2 \frac{100\pi}{3}$



$\sec 15\pi$ + $\sqrt{2} \sin \frac{39\pi}{4} \sin \frac{2\pi}{2} - \csc^2 \frac{100\pi}{3}$

$(-1) + \sqrt{2} \left(\frac{-1}{\sqrt{2}}\right) (1) - \left(\frac{2}{-\sqrt{3}}\right)^2$

$-1 + \sqrt{2} \left(\frac{-1}{\sqrt{2}}\right) (1) - \frac{4}{3}$

$-1 - \frac{\sqrt{2}}{\sqrt{2}} - \frac{4}{3}$

$-1 - 1 - \frac{4}{3}$

$-\frac{3}{3} - \frac{3}{3} - \frac{4}{3}$

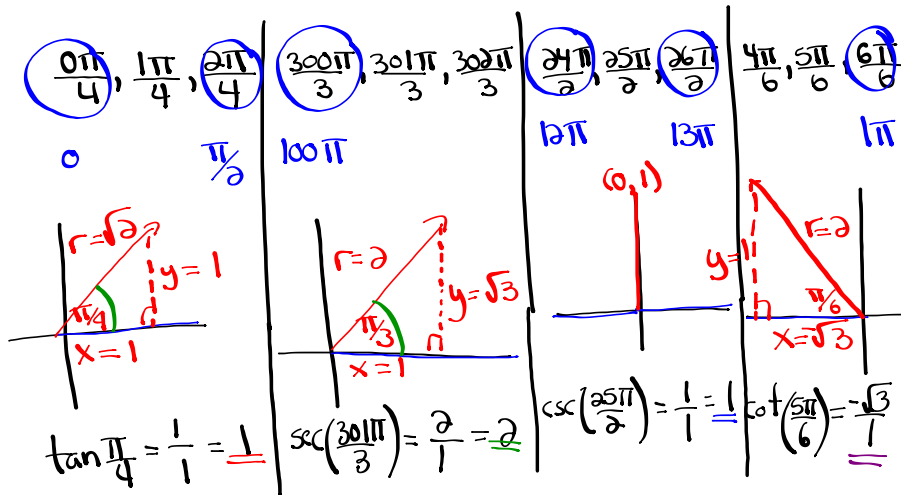
$\frac{-10}{3}$

Questions from Homework

$$\textcircled{8} \frac{\tan\left(-\frac{15\pi}{4}\right) + \sec\left(\frac{301\pi}{3}\right)}{\csc\left(\frac{25\pi}{2}\right) + \cot\left(-\frac{31\pi}{6}\right)}$$

$\xrightarrow{-\frac{15\pi}{4} + \frac{16\pi}{4} = \frac{\pi}{4}}$
 $\xrightarrow{-\frac{31\pi}{6} + \frac{36\pi}{6} = \frac{5\pi}{6}}$

$$\frac{\tan\left(\frac{\pi}{4}\right) + \sec\left(\frac{301\pi}{3}\right)}{\csc\left(\frac{25\pi}{2}\right) + \cot\left(\frac{5\pi}{6}\right)}$$



$$\frac{\tan\left(\frac{\pi}{4}\right) + \sec\left(\frac{301\pi}{3}\right)}{\csc\left(\frac{25\pi}{2}\right) + \cot\left(\frac{5\pi}{6}\right)}$$

$$\frac{1 + 2}{1 + (-\sqrt{3})}$$

$$\frac{3}{(1-\sqrt{3})(1+\sqrt{3})}$$

$$\frac{3+3\sqrt{3}}{1+\sqrt{3}-\sqrt{3}-3}$$

$$\boxed{\frac{3+3\sqrt{3}}{-2}} \quad \text{or} \quad \boxed{\frac{-3-3\sqrt{3}}{2}}$$

Introduction to Trigonometric Equations

trigonometric equation

- an equation involving trigonometric ratios

Focus on...

- algebraically solving first-degree and second-degree trigonometric equations in radians and in degrees
- verifying that a specific value is a solution to a trigonometric equation
- identifying exact and approximate solutions of a trigonometric equation in a restricted domain
- determining the general solution of a trigonometric equation

Did You Know?

In equations, mathematicians often use the notation $\cos^2 \theta$. This means the same as $(\cos \theta)^2$.

Let's start with basic LINEAR trigonometric equations...

...Pre-Calculus 110

Solve: $\sin \theta = 0.9659$, $-360^\circ < \theta < 720^\circ$
(Degrees)

- Reference angle?
- Which quadrants?
- Any co-terminal angles acceptable?

- If the domain is in degrees, give solutions in degrees.
- If the domain is in radians, give solutions in radians.

$\sin \theta = 0.9659$ use positive for $\bar{\theta}$ where is $\sin \theta > 0$ (positive)

$\bar{\theta} = \sin^{-1}(0.9659)$

$\bar{\theta} = 75^\circ$

Q1	Q2
$\theta = \bar{\theta}$	$\theta = 180^\circ - \bar{\theta}$
$\theta = 75^\circ$	$\theta = 180^\circ - 75^\circ = 105^\circ$
$\theta = 75^\circ - 360^\circ = -285^\circ$	$\theta = 105^\circ - 360^\circ = -255^\circ$
$\theta = 75^\circ + 360^\circ = 435^\circ$	$\theta = 105^\circ + 360^\circ = 465^\circ$

Solve: $\sec \theta = \frac{-1.3054}{1}$, $-2\pi \leq \theta \leq 2\pi$ (Approx. Value)
 (Radians) -6.28 6.28

* $\cos \theta = \frac{1}{-1.3054}$ where is $\cos < 0$ (negative)

$\cos \theta = -0.7660$

$\bar{\theta} = \cos^{-1}(0.7660)$

$\bar{\theta} = 0.7$ rads.

use positive for $\bar{\theta}$

Q2	Q3
----	----

$\theta = \pi - \bar{\theta}$

$\theta = \pi + \bar{\theta}$

$\theta = 3.14 - 0.7 = 2.44$ $\theta = 3.14 + 0.7 = 3.84$

$\theta = 2.44 - 6.28 = -3.84$ $\theta = 3.84 - 6.28 = -2.44$

Ex. $\sqrt{2} \cos \theta + 1 = 0$, $-360^\circ \leq \theta \leq 720^\circ$ (Degrees)

(Exact Value)

$$\frac{\sqrt{2} \cos \theta}{\sqrt{2}} = \frac{-1}{\sqrt{2}}$$

S/A
A/C

$$\cos \theta = -\frac{1}{\sqrt{2}}$$

where is $\cos < 0$ (negative)

$$\bar{\theta} = \cos^{-1}\left(\frac{1}{\sqrt{2}}\right)$$

use positive for $\bar{\theta}$

$$\bar{\theta} = 45^\circ$$

Q2

Q3

$$\theta = 180^\circ - \bar{\theta}$$

$$\theta = 180^\circ + \bar{\theta}$$

$$\theta = 180^\circ - 45^\circ = 135^\circ$$

$$\theta = 180^\circ + 45^\circ = 225^\circ$$

$$\theta = 135^\circ - 360^\circ = -225^\circ$$

$$\theta = 225^\circ - 360^\circ = -135^\circ$$

$$\theta = 135^\circ + 360^\circ = 495^\circ$$

$$\theta = 225^\circ + 360^\circ = 585^\circ$$

Ex. $\sin x + 1 = 0$, $-2\pi \leq x \leq 4\pi$ (Radians)

(Exact Value)

$$\sin x = -1$$

$$\bar{x} = \frac{3\pi}{2} \text{ (Unit Circle)}$$

$$x = \frac{3\pi}{2}$$

$$x = \frac{3\pi}{2} - \frac{2\pi}{1} \quad \left| \quad x = \frac{3\pi}{2} + \frac{2\pi}{1} \right.$$

$$x = \frac{3\pi}{2} - \frac{4\pi}{2} \quad \left| \quad x = \frac{3\pi}{2} + \frac{4\pi}{2} \right.$$

$$x = -\frac{\pi}{2} \quad \left| \quad x = \frac{7\pi}{2} \right.$$

Solutions:

$$x = -\frac{\pi}{2}, \frac{3\pi}{2}, \frac{7\pi}{2}$$

① $\sin \theta = -\frac{\sqrt{3}}{2}$ where is $\sin \theta < 0$ $\frac{S}{A}$
 $\bar{\theta} = \sin^{-1}\left(\frac{\sqrt{3}}{2}\right)$ \leftarrow use positive $\frac{S}{A}$
 $\bar{\theta} = 60^\circ$

Q3	Q4
$\theta = 180^\circ + 60^\circ = 240^\circ$	$\theta = 360^\circ - 60^\circ = 300^\circ$
$240^\circ \pm 360^\circ n, n \in \mathbb{N}$	$300^\circ \pm 360^\circ n, n \in \mathbb{N}$

② $\cos \theta = -\frac{1}{2}$ where is $\cos \theta < 0$ $\frac{S}{A}$
 $\bar{\theta} = \cos^{-1}\left(\frac{1}{2}\right)$
 $\bar{\theta} = 60^\circ$

Q2	Q3
$\theta = 180^\circ - 60^\circ = 120^\circ$	$\theta = 180^\circ + 60^\circ = 240^\circ$
$120^\circ \pm 360^\circ n, n \in \mathbb{N}$	$240^\circ \pm 360^\circ n, n \in \mathbb{N}$

③ $\tan \theta = -\frac{\sqrt{3}}{3}$ where is $\tan \theta < 0$ $\frac{S}{A}$
 $\tan \theta = -\frac{1}{\sqrt{3}}$
 $\bar{\theta} = \tan^{-1}\left(\frac{1}{\sqrt{3}}\right)$
 $\bar{\theta} = 30^\circ$

Q2	Q4
$\theta = 180^\circ - 30^\circ = 150^\circ$	$\theta = 360^\circ - 30^\circ = 330^\circ$
$150^\circ \pm 360^\circ n, n \in \mathbb{N}$	$330^\circ \pm 360^\circ n, n \in \mathbb{N}$

④ $\tan \theta = \frac{\sqrt{3}}{1}$ where is $\tan \theta > 0$ $\frac{S}{A}$
 $\bar{\theta} = \tan^{-1}\left(\frac{\sqrt{3}}{1}\right)$
 $\bar{\theta} = 60^\circ$

Q1	Q3
$\theta = 60^\circ$	$\theta = 360^\circ - 60^\circ = 300^\circ$
$60^\circ \pm 360^\circ n, n \in \mathbb{N}$	$300^\circ \pm 360^\circ n, n \in \mathbb{N}$

⑤ $\sin \theta = -1$
 * Unit Circle
 $\theta = 270^\circ \rightarrow 270^\circ \pm 360^\circ n, n \in \mathbb{N}$

⑥ $5 \sin \theta - 4 = 0$ where is $\sin \theta > 0$ $\frac{S}{A}$
 $\sin \theta = \frac{4}{5}$
 $\sin \theta = 0.8$ (approx. value)
 $\bar{\theta} = \sin^{-1}(0.8)$
 $\bar{\theta} = 53.1^\circ$

Q1	Q2
$\theta = 53.1^\circ$	$\theta = 180^\circ - 53.1^\circ = 126.9^\circ$
$53.1^\circ \pm 360^\circ n, n \in \mathbb{N}$	$126.9^\circ \pm 360^\circ n, n \in \mathbb{N}$

Your Turn

Solve each trigonometric equation in the specified domain.

a) $3 \cos \theta - 1 = \cos \theta + 1, -2\pi \leq \theta \leq 2\pi$

b) $4 \sec x + 8 = 0, 0^\circ \leq x < 360^\circ$

a) $3 \cos \theta - 1 = \cos \theta + 1, -2\pi \leq \theta \leq 2\pi \text{ (Radians)}$

$$3 \cos \theta - \cos \theta = 1 + 1$$

$$2 \cos \theta = 2$$

$$\cos \theta = 1$$

(Unit Circle)

$$\theta = 0 - 2\pi = -2\pi$$

$$\theta = 0, 2\pi, -2\pi$$

b) $4 \sec x + 8 = 0, 0^\circ \leq x < 360^\circ \text{ (Degrees)}$

$$\frac{4 \sec x}{4} = \frac{-8}{4}$$

$$\sec x = -\frac{2}{1}$$

* $\cos x = -\frac{1}{2}$ where is $\cos x < 0$ (Negative)

$$x = 60^\circ$$

Q2	Q3
$\theta = 180^\circ - \bar{\theta}$	$\theta = 180^\circ + \bar{\theta}$
$\theta = 180^\circ - 60^\circ$	$\theta = 180^\circ + 60^\circ$
$\theta = 120^\circ$	$\theta = 240^\circ$

Questions from Homework

Back

③ $\tan \theta = -\frac{\sqrt{3}}{3} = -\frac{1}{\sqrt{3}}$

Where is $\tan \theta < 0$ (Negative)

(Triangle) $\bar{\theta} = 30^\circ$

Q2	Q4
$\theta = 180^\circ - \bar{\theta}$	$\theta = 360^\circ - \bar{\theta}$
$\theta = 180^\circ - 30^\circ = 150^\circ$	$\theta = 360^\circ - 30^\circ = 330^\circ$
$150^\circ \pm 360^\circ n, n \in \mathbb{N}$	$330^\circ \pm 360^\circ n, n \in \mathbb{N}$

Back

⑫ $\tan \theta = \text{undefined}$
(Unit Circle)

$\tan \theta = \frac{y}{x} = \frac{y}{0}$

$\theta = \frac{\pi}{2}, \frac{3\pi}{2}$

Front

⑫ $5 \sin \theta - 4 = 0$ (Approximate Value)

$\frac{5 \sin \theta}{5} = \frac{4}{5}$

$\sin \theta = 0.8$

Where is $\sin \theta > 0$ (Positive)

$\bar{\theta} = \sin^{-1}(0.8)$

$\bar{\theta} = 53.1^\circ$

Q1	Q2
$\theta = \bar{\theta}$	$\theta = 180^\circ - \bar{\theta}$
$\theta = 53.1^\circ$	$\theta = 180^\circ - 53.1^\circ$
	$\theta = 126.9^\circ$
$53.1^\circ \pm 360^\circ n, n \in \mathbb{N}$	$126.9^\circ \pm 360^\circ n, n \in \mathbb{N}$

Factoring trinomials:

① Hard Trinomial

$$\underline{2}x^2 + \underline{7}x + \underline{6} \quad \underline{3} \times \underline{4} = 12$$

$$\underline{3} + \underline{4} = 7$$

$$\underline{(x+3)} \underline{(x+4)}$$

$$\underline{(2x+3)} \underline{(x+2)}$$

② Simple trinomial

$$x^2 + \underline{7}x + \underline{6} \quad \underline{6} \times \underline{1} = 6$$

$$\underline{6} + \underline{1} = 7$$

$$\underline{(x+1)} \underline{(x+6)}$$

Let's move onto QUADRATIC trigonometric equations... • Common

...Pre-Calculus 110 exponent = 2

(Factor)

- diff. of squares
- trinomial

- What strategies can we use to solve quadratic equations?
- Quadratic trigonometric equations will ultimately become TWO linear trigonometric equations.

(Radians)

Solve: $2\sin^2 x + \sin x = 1, 0 \leq x \leq 4\pi$

$$2\sin^2 x + \sin x - 1 = 0 \quad \begin{matrix} -1 \times 2 = -2 \\ -1 + 2 = 1 \end{matrix}$$

$$(\sin x + \frac{1}{2})(\sin x - \frac{1}{2}) = 0$$

$$(\sin x + 1)(2\sin x - 1) = 0$$

$$\sin x + 1 = 0$$

$$\sin x = -1$$

(unit circle)

$$x = \frac{3\pi}{2}$$

$$x = \frac{3\pi}{2} + \frac{2\pi}{1}$$

$$x = \frac{3\pi}{2} + \frac{4\pi}{2} = \frac{7\pi}{2}$$

$$2\sin x - 1 = 0$$

$$\sin x = \frac{1}{2}$$

(Special triangle)

$$x = \sin^{-1}\left(\frac{1}{2}\right)$$

$$x = \frac{\pi}{6}$$

S/A
T/C

where is $\sin x > 0$

Q1	Q2
$\theta = \frac{\pi}{6}$	$\theta = \pi - \frac{\pi}{6}$
$\theta = \frac{\pi}{6} + 2\pi$	$\theta = \frac{5\pi}{6}$
$\theta = \frac{13\pi}{6}$	$\theta = \frac{5\pi}{6} + 2\pi$
	$\theta = \frac{17\pi}{6}$

Ex. $\cos^2 \theta - \frac{1}{2} \cos \theta = 0, -2\pi \leq \theta \leq 4\pi$ (Common Factor)

$$\cos \theta \left(\cos \theta - \frac{1}{2} \right) = 0$$

S/A
T/e

$$\cos \theta = 0$$

(unit circle)

$$\theta = \frac{\pi}{2}, \frac{3\pi}{2}$$

$$\theta = \frac{5\pi}{2}, \frac{7\pi}{2} \text{ (Add } \frac{2\pi}{1})$$

$$\theta = -\frac{3\pi}{2}, -\frac{\pi}{2} \text{ (Sub } \frac{2\pi}{1})$$

$$\cos \theta - \frac{1}{2} = 0$$

$$\cos \theta = \frac{1}{2}$$

(Special triangle)

$$\theta = \cos^{-1} \left(\frac{1}{2} \right)$$

$$\theta = \frac{\pi}{3}$$

where is $\cos \theta > 0$

Q1

$$\theta = \frac{\pi}{3}$$

$$\theta = \frac{7\pi}{3}$$

$$\theta = -\frac{5\pi}{3}$$

Q4

$$\theta = \frac{2\pi}{1} - \frac{\pi}{3} = \frac{5\pi}{3}$$

$$\theta = \frac{11\pi}{3}$$

$$\theta = -\frac{\pi}{3}$$

$$\theta = -\frac{5\pi}{3}, -\frac{3\pi}{2}, -\frac{\pi}{2}, -\frac{\pi}{3}, \frac{\pi}{3}, \frac{\pi}{2}, \frac{3\pi}{2}, \frac{7\pi}{3}, \frac{5\pi}{2}, \frac{7\pi}{2}, \frac{11\pi}{3}$$

Ex. $6 \sin^2 x - \sin x = 2, -2\pi \leq \theta \leq 4\pi$ (Hard Trinomial)

Your Turn

Solve for θ .

$$\cos^2 \theta - \cos \theta - 2 = 0, 0^\circ \leq \theta < 360^\circ \quad (\text{Simple Trinomial})$$

Give solutions as exact values where possible. Otherwise, give approximate measures to the nearest thousandth of a degree.

General Solution of a Trigonometric Equation

Solve: $3\cos^2 \theta - \cos \theta = 2; \theta \in \mathbb{R}$ (Hard Trinomial)

(All of the angles)

Determine the general solution for $\sin^2 x - 1 = 0$ over the real numbers if x is measured in radians.

$$\sin^2 x - 1 = 0 \quad (\text{Difference of Squares})$$

$$(\sin x + 1)(\sin x - 1) = 0$$

$$\sin x + 1 = 0$$

$$\sin x = -1$$

(Unit Circle)

$$x = \frac{3\pi}{2}$$

$$\frac{3\pi}{2} \pm 2\pi n, n \in \mathbb{N}$$

$$\sin x - 1 = 0$$

$$\sin x = 1$$

(Unit Circle)

$$x = \frac{\pi}{2}$$

$$\frac{\pi}{2} \pm 2\pi n, n \in \mathbb{N}$$

$$x^2 - 4$$

$$(x+2)(x-2)$$

Did You Know?

$2n$, where $n \in \mathbb{I}$, represents all even integers.

$2n + 1$, where $n \in \mathbb{I}$, is an expression for all odd integers.

$$x = \frac{\pi}{2} + 2\pi n, \text{ where } n \in \mathbb{I}$$

$$x = \frac{3\pi}{2} + 2\pi n, \text{ where } n \in \mathbb{I}$$

or

$$x = \frac{\pi}{2} + \pi n, \text{ where } n \in \mathbb{I}$$

or

$$(2n + 1)\left(\frac{\pi}{2}\right), n \in \mathbb{I}$$

(Difference of squares)

Determine the general solution for $\cos^2 x - 1 = 0$, where the domain is real numbers measured in degrees.

Unit Review...

What topics have we covered??

- Radian Measure
- Co-terminal angles
- Principal Angles
- Angular Velocity (Open Response)
- The Unit Circle
- Trig Expressions (Open Response)
- Trig Equations (Open Response)

Chapter 4 Review:

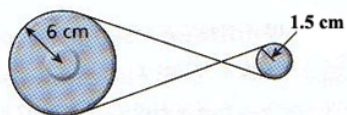
Pages 215 - 217

Check-Up problem...

Solve:

$$\sin x \sec x + 2 \sin x = 0, \quad x \in R \quad (x \text{ is measured in radians})$$

If the belt in the pulley system below travels 30 cm, what is the angle of rotation of the smaller pulley?



[A] $\frac{\pi}{9}$ radians

[B] 20°

[C] 20 radians

[D] 5°

Nibbles the hamster is running at 0.02 m/s on an exercise wheel of radius 8 cm. What is the angular velocity of this wheel?

[A] 0.15 rad/minute

[B] 240 rad/minute

[C] 0.25 rad/minute

[D] 15 radians/minute

Solve: $2(1 - \sin \theta)^2 + \sin \theta = 2(3 - 4 \sin^2 \theta)$, $-360^\circ \leq \theta \leq 720^\circ$

$$2(1 - \sin \theta)^2 + \sin \theta = 2(3 - 4 \sin^2 \theta)$$

$$2(1 - \sin \theta)(1 - \sin \theta) + \sin \theta = 6 - 8 \sin^2 \theta$$

$$2(1 - \sin \theta - \sin \theta + \sin^2 \theta) + \sin \theta = 6 - 8 \sin^2 \theta$$

$$2(1 - 2 \sin \theta + \sin^2 \theta) + \sin \theta = 6 - 8 \sin^2 \theta$$

$$2 - 4 \sin \theta + 2 \sin^2 \theta + \sin \theta - 6 + 8 \sin^2 \theta = 0$$

$$10 \sin^2 \theta - 3 \sin \theta - 4 = 0 \quad (\text{Hard Trinomial!})$$

$$- \times - = -40$$

$$- + - = -3$$

Solve: $6 \sin^2 \theta - 3 \sin \theta = 0$, $0 \leq \theta \leq 360^\circ$

[A] $0^\circ, 30^\circ, 180^\circ, 330^\circ, 360^\circ$

[C] $30^\circ, 90^\circ, 120^\circ, 270^\circ$

[B] $0^\circ, 30^\circ, 180^\circ, 150^\circ, 360^\circ$

[D] $0^\circ, 180^\circ, 210^\circ, 330^\circ, 360^\circ$

$$6 \sin^2 \theta - 3 \sin \theta = 0, \quad 0^\circ \leq \theta \leq 360^\circ \quad (\text{Common Factor})$$

$$3 \sin \theta (2 \sin \theta - 1) = 0$$

$$\sin^2 \theta = (\sin \theta)(\sin \theta)$$

$$\frac{S}{T/C}$$

$$\frac{3 \sin \theta = 0}{3} \quad \frac{0}{3}$$

$$\sin \theta = 0$$

(Unit Circle)

$$\theta = 0^\circ, 180^\circ, 360^\circ$$

$$2 \sin \theta - 1 = 0$$

$$2 \sin \theta = \frac{1}{2}$$

$$\sin \theta = \frac{1}{2}$$

$$\theta = \sin^{-1}\left(\frac{1}{2}\right)$$

$$\theta = 30^\circ$$

Where is $\sin \theta > 0$

Q1

$$\theta = 30^\circ$$

Q2

$$\theta = 180^\circ - 30^\circ$$

$$\theta = 150^\circ$$

If $\csc \theta < 0$ and $\tan \theta > 0$, then which of the following could be a possible measure of angle θ ?

[A] $\frac{11\pi}{6}$

[B] $\frac{4\pi}{3}$

[C] $\frac{3\pi}{4}$

[D] $\frac{\pi}{2}$

What is the principal angle of $-\frac{25\pi}{4}$?

[A] $\frac{3\pi}{4}$

[B] $\frac{\pi}{4}$

[C] $-\frac{\pi}{4}$

[D] $\frac{7\pi}{4}$

Attachments

Worksheet - Sketching Angles in Radians.doc