

## Chapter 2 Radical Functions

Solve for  $x$ :  $\sqrt{x+8} = x+6$  *Square both sides*

$$x+8 = (x+6)(x+6)$$

$$x+8 = x^2 + 6x + 6x + 36$$

$$x+8 = x^2 + 12x + 36$$
 *Bring all terms to same side*

$$0 = x^2 + 12x + 36 - x - 8$$

$$0 = x^2 + 11x + 28$$
  $\frac{4}{4} \times \frac{7}{7} = 28$   
 $\frac{4}{4} + \frac{7}{7} = 11$

$$0 = (x+4)(x+7)$$

$$x+4 = 0 \quad | \quad x+7 = 0$$

$$x = -4 \quad | \quad x = -7$$

*Set both factors = 0*Test  $x = -4$  *is a solution*

$$\sqrt{x+8} = x+6$$

$$\sqrt{-4+8} \quad | \quad -4+6$$

$$\sqrt{4}$$

$$2$$

$$2$$

Test  $x = -7$  *is extraneous*

$$\sqrt{x+8} = x+6$$

$$\sqrt{-7+8} \quad | \quad -7+6$$

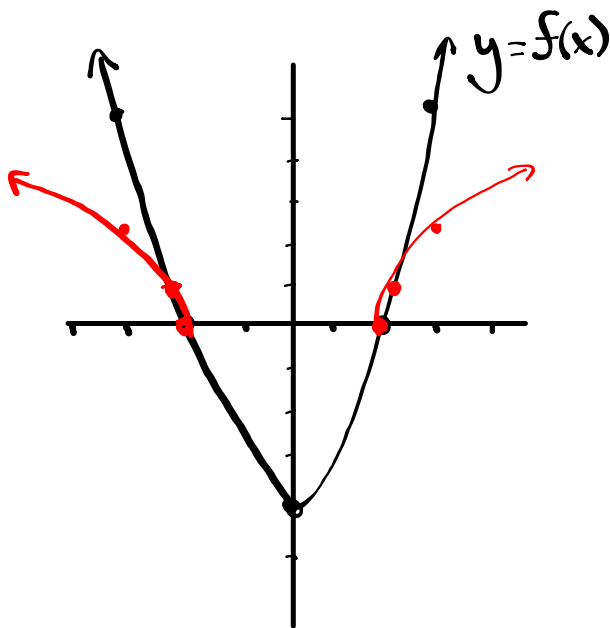
$$\sqrt{1}$$

$$1$$

$$-1$$

Ch. 2

③ Using the graph of  $y = f(x)$ , sketch the graph of  $y = \sqrt{f(x)}$ . state the domain and range of each.



$$y = f(x)$$

$$D: \{x | x \in \mathbb{R}\} \text{ or } (-\infty, \infty)$$

$$R: \{y | y \geq -4, y \in \mathbb{R}\} \text{ or } [-4, \infty)$$

$$y = \sqrt{f(x)}$$

$$D: \{x | x \leq -2, x \geq 2, x \in \mathbb{R}\}$$

$$\text{or } (-\infty, -2] + [2, \infty)$$

$$R: \{y | y \geq 0, y \in \mathbb{R}\} \text{ or } [0, \infty)$$

## Chapter 7 → Exponential Functions

6. Solve the following equations (be sure to test your answers).

(a)  $2^{2x+2} + 7 = 71$

(b)  $9^{2x+1} = 81(27^x)$

a)  $2^{2x+2} + 7 = 71$

$2^{2x+2} = 64$

~~$2^{2x+2} = 6$~~

$2x+2 = 6$

$2x = \frac{4}{2}$

 $x = 2$  is a solution

Test

$2^{2x+2} + 7 = 71$

$2^{2(2)+2} + 7$

$2^6 + 7$

$64 + 7$

$71$

b)  $9^{2x+1} = 81(27^x)$

$(3^2)^{2x+1} = (3^4)(3^x)$

$3^{4x+2} = (3^4) \cdot (3^x)$

~~$3^{4x+2} = 3^{3x+4}$~~

$4x+2 = 3x+4$

 $x = 2$  is a solution

Test:

$9^{2x+1} = 81(27^x)$

$9^{2(2)+1} = 81(27^2)$

$9^5 = 81(729)$

$59049 = 59049$

## Chapter 8 → Logarithms

4. Rewrite each expression as a single logarithm.

$$3\log_5 x + \frac{1}{2}\log_5(x-1) - \log_5(x^2+1)$$

$$\log_5 x^3 + \log_5 (x-1)^{\frac{1}{2}} - \log_5 (x^2+1)$$

$$\log_5 \left( \frac{x^3 \cdot (x-1)^{\frac{1}{2}}}{(x^2+1)} \right)$$

$$\log_5 \frac{x^3 \sqrt{x-1}}{x^2+1}$$

ex.  $3\log_2 x - 4\log_2 x^2 + \log_2 x - 2\log_2 x^5$

$$\log_2 x^3 - \log_2 x^8 + \log_2 x - \log_2 x^{10}$$

$$\log_2 \left( \frac{x^3 \cdot x}{x^8 \cdot x^{10}} \right)$$

$$\log_2 \left( \frac{x^4}{x^{18}} \right)$$

$$\log_2 x^{-14}$$

$$-14\log_2 x$$

## Chapter 8 → Logarithms

7. Solve the following equation (be sure to test your answers).

$$\log_{10}(x+2) + \log_{10}(x-1) = 1$$

$$\log_{10}((x+2)(x-1)) = 1$$

$$\log_{10}(x^2 - x + 2x - 2) = 1$$

$$\log_{10}(x^2 + x - 2) = 1 \quad (\text{log form})$$

↑ Base     ↑ ans     ↑ exp

$$10^1 = x^2 + x - 2 \quad (\text{exp. form})$$

$$10 = x^2 + x - 2 \quad \text{Bring everything to one side}$$

$$0 = x^2 + x - 12 \quad \begin{array}{l} -3 \times 4 = -12 \\ -3 + 4 = 1 \end{array}$$

$$0 = (x-3)(x+4)$$

$$\begin{array}{l|l} x-3=0 & x+4=0 \\ x=3 & x=-4 \end{array}$$

Test  $x=3$  is a solution     Test  $x=-4$  is extraneous

$$\log_{10}(x+2) + \log_{10}(x-1) = 1 \quad \log_{10}(x+2) + \log_{10}(x-1) = 1$$

$$\log_{10}(3+2) + \log_{10}(3-1) = 1 \quad \log_{10}(-4+2) + \log_{10}(-4-1) = 1$$

$$\log_{10} 5 + \log_{10} 2 = 1$$

$$\cancel{\log_{10}(-2)} + \cancel{\log_{10}(-5)} = 1$$

$$\log_{10} 10 = 1$$

↑  
undefined

$$1 = 1$$

## Chapter 7 or 8

2. Cobalt-60, which has a half-life of 5.3 years, is used in medical radiology. A sample of 60 mg of the material is present today.

$$y = (\text{Initial Amount})(\text{Base})^{\text{Time of halves}}$$

a) Write an equation to express the mass of cobalt-60 (in mg), as a function of time,  $t$  in years. [2]

Given: I.A. = 60 mg      time = 5.3 years       $y = 60(\frac{1}{2})^{t/5.3}$   
 Base =  $\frac{1}{2}$  or (0.5)       $m = 60(\frac{1}{2})^{t/5.3}$

b) What amount will be present in 10.6 years?  $x = 10.6$  [2]

$$y = 60(\frac{1}{2})^{\frac{10.6}{5.3}}$$

$$y = 60(\frac{1}{2})^2$$

$$y = 60(\frac{1}{4})$$

$$y = 15 \text{ mg}$$

c) How long will it take for the amount of cobalt-60 to decay to 12.5% of its initial amount? [3]

$$60 \times 0.125 = 7.5$$

$$\frac{7.5}{60} = \frac{60(0.5)^{t/5.3}}{60}$$

$$y = 7.5$$

$$0.125 = (0.5)^{t/5.3}$$

$$\frac{\log(0.125)}{\log(0.5)} = \frac{\log(0.5)^3}{\log(0.5)}$$

$$5.3 \cdot 3 = \frac{t}{5.3} \cdot 5.3$$

$$15.9 \text{ years} = t$$

Using logs:  $\frac{7.5}{60} = \frac{60(0.5)^{t/5.3}}{60}$

$$0.125 = (0.5)^{t/5.3}$$

$$\log(0.125) = \log(0.5)^{t/5.3}$$

$$5.3 \cdot \log(0.125) = \frac{t}{5.3} \log(0.5) \cdot 5.3$$

$$\frac{5.3 \log(0.125)}{\log(0.5)} = \frac{t \log(0.5)}{\log(0.5)}$$

$$15.9 \text{ years} = t$$

Chapter 4  $\rightarrow$  Trigonometry/Radian Measure2. Solve for all values of  $\theta$  in the specified domain.

$$\tan^2 \theta + \tan \theta = 0, \quad 0 \leq \theta \leq 2\pi \quad (\text{Radians})$$

$$\tan \theta (\tan \theta + 1) = 0$$

$$\Theta = 0, \pi, 2\pi, \frac{3\pi}{4}, \frac{7\pi}{4}$$

$$\tan \theta = 0$$

(Unit Circle)

$$\theta = 0, \pi, 2\pi$$

$$\tan \theta + 1 = 0$$

$$\tan \theta = -1$$

(Special triangle)

$$\bar{\theta} = \frac{\pi}{4}$$

where is  $\tan \theta < 0$

Q2

$$\theta = \pi - \bar{\theta}$$

$$\theta = \pi - \frac{\pi}{4}$$

$$\theta = \frac{4\pi}{4} - \frac{\pi}{4} = \frac{3\pi}{4}$$

Q4

$$\theta = 2\pi - \bar{\theta}$$

$$\theta = 2\pi - \frac{\pi}{4}$$

$$\theta = \frac{8\pi}{4} - \frac{\pi}{4} = \frac{7\pi}{4}$$

$$e. \cos^2 \theta + \frac{1}{2} \cos \theta = 0, \quad 0^\circ \leq \theta < 360^\circ \quad (\text{Degrees})$$

$$\cos \theta \left( \cos \theta + \frac{1}{2} \right) = 0$$

$$\Theta = 90^\circ, 120^\circ, 240^\circ, 270^\circ$$

$$\cos \theta = 0$$

(Unit Circle)

$$\theta = 90^\circ, 270^\circ$$

$$\cos \theta + \frac{1}{2} = 0$$

$$\cos \theta = -\frac{1}{2}$$

(Special triangle)

$$\bar{\theta} = 60^\circ$$

where is  $\cos \theta < 0$

Q2

$$\theta = 180^\circ - \bar{\theta}$$

$$\theta = 180^\circ - 60^\circ$$

$$\theta = 120^\circ$$

Q3

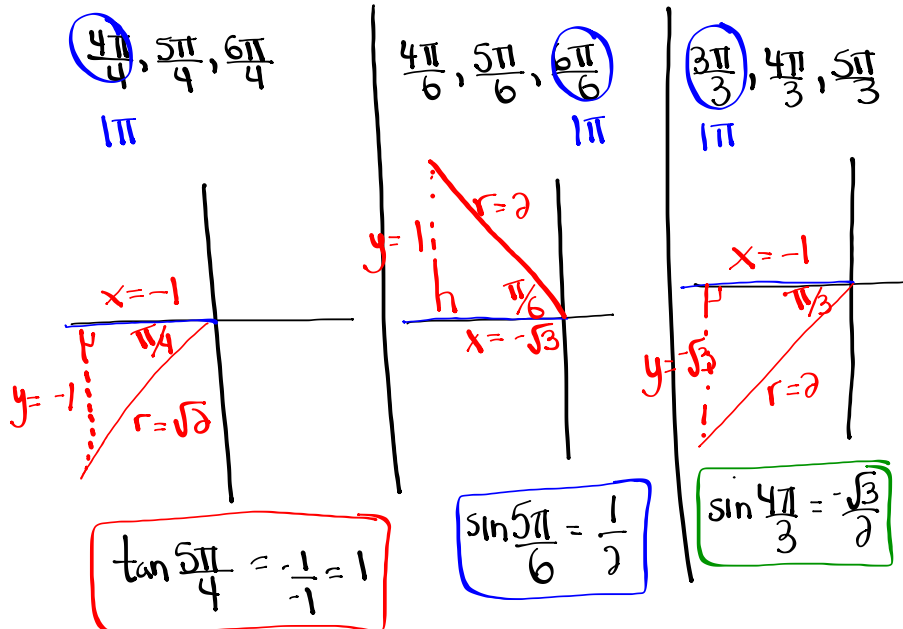
$$\theta = 180^\circ + \bar{\theta}$$

$$\theta = 180^\circ + 60^\circ$$

$$\theta = 240^\circ$$

## Chapter 4 → Trig/Radian Measure

$$\frac{5 \tan^2\left(\frac{5\pi}{4}\right)}{6 \sin\left(\frac{5\pi}{6}\right) + 4 \sin\left(\frac{4\pi}{3}\right)}$$



$$\frac{5 \tan^2 \frac{5\pi}{4}}{6 \sin \frac{5\pi}{6} + 4 \sin \frac{4\pi}{3}}$$

$$\frac{5(1)^2}{6\left(\frac{1}{2}\right) + 4\left(-\frac{\sqrt{3}}{2}\right)}$$

$$\frac{5}{(3 - 2\sqrt{3})(3 + 2\sqrt{3})}$$

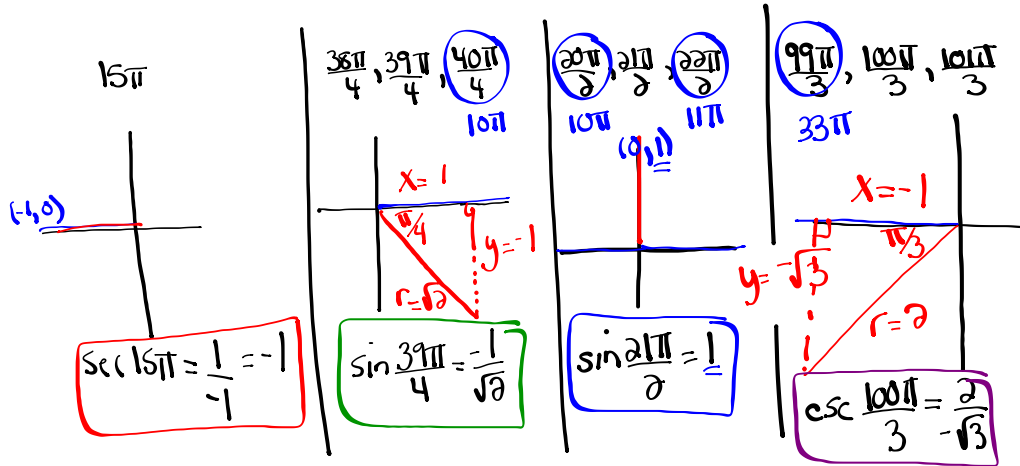
$$\frac{15 + 10\sqrt{3}}{9 - 4(3)}$$

$$\boxed{\frac{15 + 10\sqrt{3}}{-3}} \quad \text{or} \quad -\frac{15 + 10\sqrt{3}}{3}$$



## Chapter 4 → Trig/Radian Measure

$$\sec 15\pi + \sqrt{2} \sin \frac{39\pi}{4} \sin \frac{21\pi}{2} - \csc^2 \frac{100\pi}{3}$$



$$\sec 15\pi + \sqrt{2} \sin \frac{39\pi}{4} \sin \frac{21\pi}{2} - \csc^2 \frac{100\pi}{3}$$

$$(-1) + \sqrt{2} \left( -\frac{1}{\sqrt{2}} \right) (1) - \left( -\frac{2}{\sqrt{3}} \right)^2$$

$$-1 - \frac{\sqrt{2}}{\sqrt{2}} - \frac{4}{3}$$

$$-1 - 1 - \frac{4}{3}$$

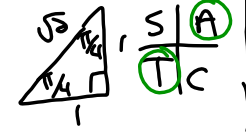
$$-2 - \frac{4}{3}$$

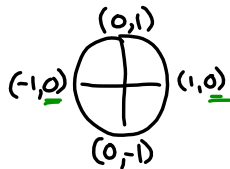
$$-\frac{6}{3} - \frac{4}{3}$$

$$\boxed{-\frac{10}{3}}$$

② a)  $\sin \theta = \sin \theta \tan \theta$   $0 \leq \theta \leq 2\pi$   
 $0 = \sin \theta \tan \theta - \sin \theta$   
 $0 = (\sin \theta)(\tan \theta - 1)$

$\sin \theta = 0$  |  $\tan \theta - 1 = 0$   $\theta = 0, \pi, 2\pi$  Common Factor  
 $\tan \theta = 1$   $\theta_R = \frac{\pi}{4}$





Where is  $\tan \theta$  positive

Q1	Q3
$\theta = \theta_R$	$\theta = \pi + \theta_R$
$\theta = \frac{\pi}{4}$	$\theta = \pi + \frac{\pi}{4}$
	$\theta = \frac{5\pi}{4}$

Solutions are:  $0, \frac{\pi}{4}, \pi, \frac{5\pi}{4}, 2\pi$

③ b)  $3 \sin^2 \theta - 2 \sin \theta - 1 = 0$   $0 \leq \theta \leq 360^\circ$   
 $(3 \sin^2 \theta - 3 \sin \theta + \sin \theta - 1) = 0$   $\frac{-3}{-3} \times \frac{1}{-1} = -3$   
 $3 \sin \theta (\sin \theta - 1) + 1 (\sin \theta - 1) = 0$   $\frac{-3}{-3} + \frac{1}{-1} = -2$   
 $(3 \sin \theta + 1)(\sin \theta - 1) = 0$

$3 \sin \theta + 1 = 0$  |  $\sin \theta - 1 = 0$   
 $\sin \theta = -\frac{1}{3}$  |  $\sin \theta = 1$   $\theta = 90^\circ$  Unit Circle  
 $\theta_R = \sin^{-1}(\frac{1}{3})$   
 $\theta_R = 19$

Where is sine negative: S/A  
T/C

Q3	Q4
$\theta = 180^\circ + \theta_R$	$\theta = 360^\circ - \theta_R$
$\theta = 180^\circ + 19$	$\theta = 360^\circ - 19$
$\theta = 199$	$\theta = 340$

## Chapkr 5 → Trig Functions

2. A weight attached to the end of a spring is bouncing up and down. As it bounces, its distance from the floor varies sinusoidally with time. You start a stopwatch, when the watch reads 0.4 sec, the weight first reaches a high point 50 cm above the floor. The next low point, 30 ~~cm~~ above the floor, occurs at 1.8 sec.

$$y = \cos x$$

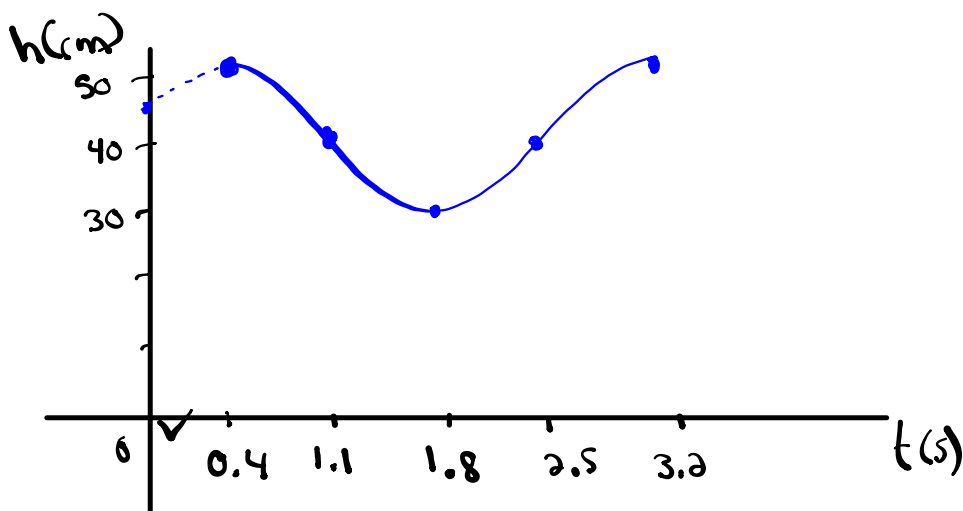
(a) Predict the distance the weight will be from the floor when the stopwatch reads 17.2 sec.

$$\begin{aligned} \text{max} &= 50 \text{ cm} & \text{Amp} &= 10 & P &= 2(1.8 - 0.4) = 2.8 & h &= 0.4 \\ \text{min} &= 30 \text{ cm} & a &= \pm 10 & b &= \frac{360}{2.8} = 128.57 \\ K &= \frac{50 + 30}{2} = 40 & y &= 10 \cos[128.57(17.2 - 0.4)] + 40 \\ & & y &= 49.9 \text{ cm} \end{aligned}$$

(b) How high was the weight above the floor when the stopwatch was initially started?

$$t = 0$$

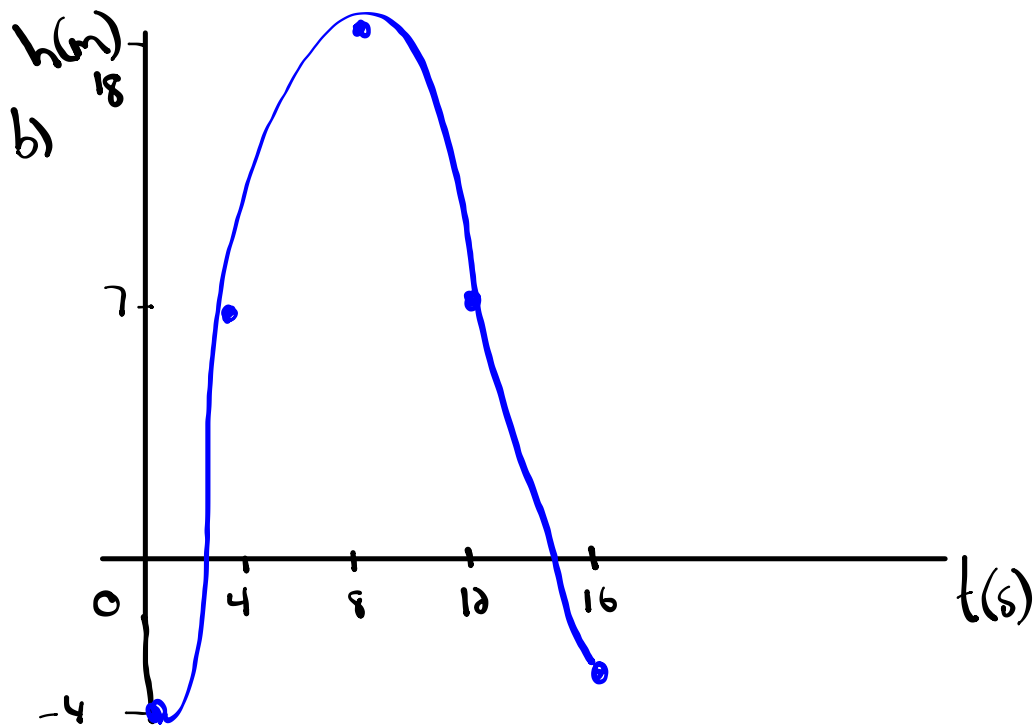
$$\begin{aligned} y &= 10 \cos[128.57(0 - 0.4)] + 40 \\ y &= 46.23 \text{ cm} \end{aligned}$$



$$\text{count by } \frac{P}{4} = \frac{2.8}{4} = 0.7$$

$$\begin{aligned} \textcircled{1} \quad \text{Amp} &= 11 & P &= 16 & \text{min} &= -4 \\ a &= \pm 11 & b &= \frac{360}{16} = 22.5 & \text{max} &= -4 + 22 = 18 \\ & & & & K &= -4 + 11 = 7 \\ & & & & h &= 0 \end{aligned}$$

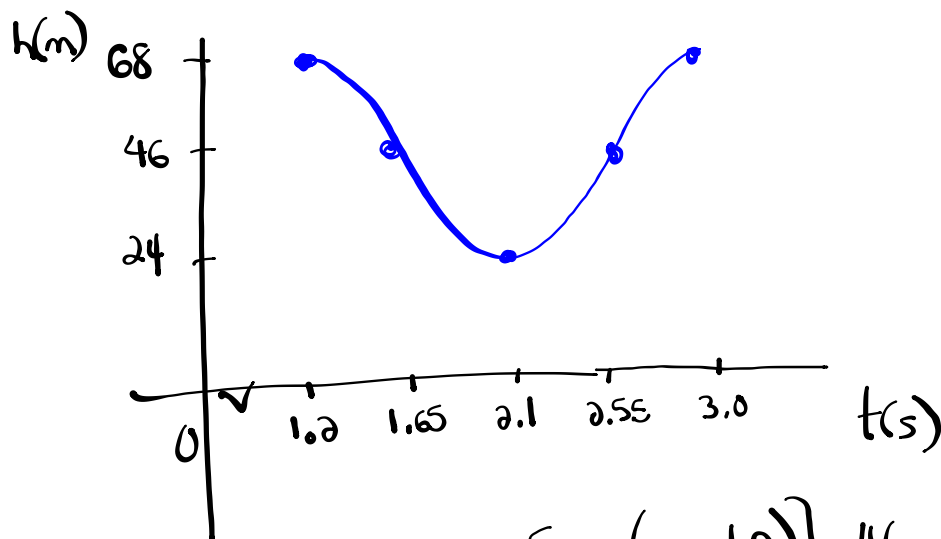
a) equation:  $y = -11\cos[22.5(x)] + 7$



$$\textcircled{4} \quad \begin{array}{lll} \max = 68 & \text{Amp} = 68 - 46 = 22 & P = 2(2.1 - 1.2) \\ \min = 24 & a = \pm 22 & P = 1.8 \\ k = \frac{68 + 24}{2} = 46 & & b = \frac{360}{1.8} = 200 \end{array}$$

$$h = \underline{1.2}$$

$$\frac{P}{4} = \frac{1.8}{4} = 0.45$$



$$y = 22 \cos[200(x - 1.2)] + 46$$

$$\textcircled{5} \text{ c) } y = \frac{1}{2} \cos(\theta + \underline{\pi}) - \underline{4}$$

$$a = \frac{1}{2}$$

$$(x, y) \rightarrow \left( \frac{1}{2}x - \pi, \frac{1}{2}y - 4 \right)$$

$$b = 1$$

$$P = \frac{2\pi}{b} = \frac{2\pi}{1} = 2\pi$$

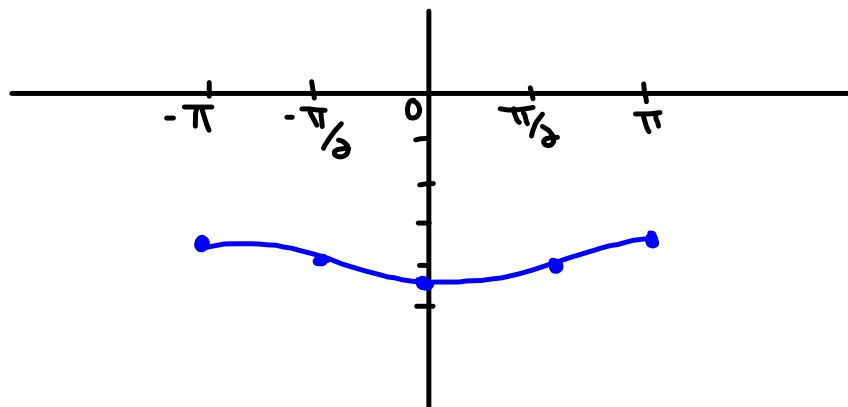
$$c = -\pi$$

$$d = -4$$

$$y = \cos \theta$$

x	y
0	1
$\frac{\pi}{2}$	0
$\pi$	-1
$\frac{3\pi}{2}$	0
$2\pi$	1

x	y
$-\pi$	$-\frac{7}{2}$ -3.5
$-\frac{\pi}{2}$	-4 -4
0	$-\frac{9}{2}$ -4.5
$\frac{\pi}{2}$	-4 -4
$\pi$	$-\frac{7}{2}$ -3.5



$$\frac{1}{\sec^2 \theta \cot \theta} = \frac{\sin \theta - \sin^3 \theta}{\cos \theta}$$

$$\frac{1}{\sec^2 \theta} \cdot \frac{1}{\cot \theta}$$

$$\cos^2 \theta \cdot \tan \theta$$

$$\cos^2 \theta \cdot \frac{\sin \theta}{\cos \theta}$$

$$\sin \theta \cos \theta$$

$$\frac{\sin \theta (1 - \sin^2 \theta)}{\cos \theta}$$

$$\frac{\sin \theta \cos^2 \theta}{\cos \theta}$$

$$\sin \theta \cos \theta$$

[www.khanacademy.com](http://www.khanacademy.com)