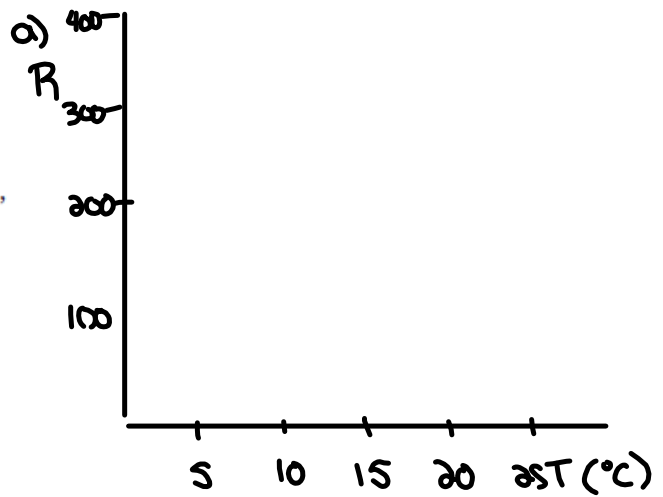


Questions from Homework

8. If seafood is not kept frozen (below 0 °C), it will spoil due to bacterial growth. The relative rate of spoilage increases with temperature according to the model $R = 100(2.7)^{\frac{T}{5}}$, where T is the temperature, in degrees Celsius, and R is the relative spoilage rate.

- a) Sketch a graph of the relative spoilage rate R versus the temperature T from 0 °C to 25 °C.
- b) Use your graph to predict the temperature at which the relative spoilage rate doubles to 200.
- c) What is the relative spoilage rate at 15 °C?
- d) If the maximum acceptable relative spoilage rate is 500, what is the maximum storage temperature?



9. A bacterial culture starts with 2000 bacteria and doubles every 0.75 h. After how many hours will the bacteria count be 32 000?

Given:

$$\text{Initial Amount} = 2000$$

$$\text{Base} = 2$$

$$\text{exp} = \frac{x}{0.75}$$

$$A = 32000$$

$$y = 2000(2)^{\frac{x}{0.75}}$$

$$A = 2000(2)^{\frac{t}{0.75}}$$

$$\frac{32000}{2000} = \frac{2000(2)^{\frac{t}{0.75}}}{2000}$$

$$16 = 2^{\frac{t}{0.75}}$$

$$2^4 = 2^{\frac{t}{0.75}}$$

$$\frac{\log 16}{\log 2} = 4$$

\downarrow exp
 \uparrow Base

$$(0.75) 4 = \frac{t}{0.75} (0.75)$$

$$\boxed{3h = t}$$

$$16 = 2^{t/0.75}$$

$$16 = (16)^{0.25 t/0.75}$$

$$(0.75) 1 = \frac{0.25t}{0.75} (0.75)$$

$$\frac{0.75}{0.25} = \frac{0.25t}{0.25}$$

$$3 = t$$

Given: $y = -3(2)^{2x+2} + 4$
 $y = -3(2)^{2(x+1)} + 4$

- i) state the parameters and describe the corresponding transformations
- ii) create a table to show what happens to the given points under each transformation
- iii) sketch the graph of the base function and the transformed function
- iv) describe the effects on the domain, range, equation of the horizontal asymptote, and intercepts

(i) $y = -3(2)^{2(x+1)} + 4$ $c = \text{base} = 2$

$a = -3 \rightarrow$ a vertical stretch by a factor of 3 and a reflection in the x axis

$b = 2 \rightarrow$ a horizontal stretch by a factor of $\frac{1}{2}$

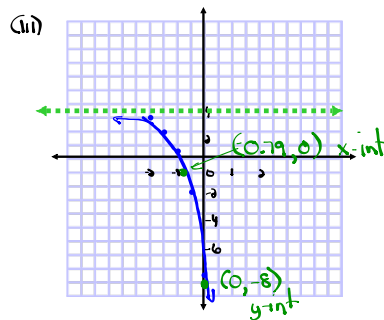
$h = -1 \rightarrow$ 1 unit left

$k = 4 \rightarrow$ 4 units up

(ii) $(x, y) \rightarrow (\frac{1}{2}x - 1, -3y + 4)$

x	y
-2	$\frac{1}{4}$
-1	$\frac{1}{2}$
0	1
1	2
2	4

x	y
-2	$\frac{1}{4} = 0.25$
-1.5	$\frac{1}{2} = 0.5$
-1	1
-0.5	2
0	4



(iv) $D: \{x | x \in \mathbb{R}\}$ or $(-\infty, \infty)$

$R: \{y | y < 4, y \in \mathbb{R}\}$ or $(-\infty, 4)$

HA: $y = 4$

x int ($y = 0$)

$y = -3(2)^{2(x+1)} + 4$

$0 = -3(2)^{2(x+1)} + 4$

$-4 = -3(2)^{2(x+1)}$

$1.3 = (2)^{2(x+1)}$

$0.42 = (2)^{2(x+1)}$ $\frac{\log 1.3}{\log 2} = 0.42$

$0.42 = 2(x+1)$

$0.21 = x+1$

$-0.79 = x$

$(-0.79, 0)$

y int ($x = 0$)

$y = -3(2)^{2(x+1)} + 4$

$y = -3(2)^{2(0+1)} + 4$

$y = -3(2)^2 + 4$

$y = -3(4) + 4$

$y = -12 + 4$

$y = -8$

check graph for these points $(0, -8)$

Ex: Exponential Equation

$$64^x = \left(\frac{1}{8}\right)^{x+1} (\sqrt{32})$$

$$64^x = \left(\frac{1}{8}\right)^{x+1} \cdot (32)^{\frac{1}{2}}$$

$$\frac{\log 64}{\log 2} = \underline{\underline{6}}$$

$$\frac{\log\left(\frac{1}{8}\right)}{\log 2} = -3$$

$$\frac{\log 32}{\log 2} = 5$$

$$(2^6)^x = (2^{-3})^{x+1} (2^5)^{\frac{1}{2}}$$

$$2^{6x} = 2^{-3x-3} \cdot 2^{\frac{5}{2}}$$

$$2^{6x} = 2^{-3x-3+\frac{5}{2}}$$

$$2^{6x} = 2^{-3x-\frac{6}{2}+\frac{5}{2}}$$

$$\cancel{2}^{6x} = \cancel{2}^{-3x-\frac{1}{2}}$$

$$6x = -3x - \frac{1}{2}$$

$$\frac{9x}{9} = -\frac{1}{2} \div 9$$

$$x = -\frac{1}{2} \cdot \frac{1}{9}$$

$$x = -\frac{1}{18}$$

Base 2: a) $\left(\frac{1}{4}\right)$ and $\sqrt{64}$

$\left(\frac{1}{4}\right)$ and 8

$$\frac{\log\left(\frac{1}{4}\right)}{\log 2} = -2 \quad \left(2\right)^{-2} \quad \text{and} \quad \left(2\right)^3 \quad \frac{\log 8}{\log 2} = 3$$

$$\begin{aligned} &\sqrt{64} \\ &(\underline{64})^{\frac{1}{2}} \\ &(\underline{2^6})^{\frac{1}{2}} \\ &2^3 \end{aligned}$$

$$\begin{aligned} &\underline{4}^6 \quad \text{or} \quad 4096 \\ &(\underline{2^2})^6 \\ &2^{12} \end{aligned}$$

$$\frac{\log 4096}{\log 2} = \underline{12}$$

↑
base exp

$$\left(\frac{1}{125}\right)^{2x} = 5^{3x+2} \cdot \sqrt{3125}$$

$$\left(\frac{1}{125}\right)^{2x} = \underline{(5)}^{3x+2} \cdot \underline{(3125)}^{\frac{1}{2}}$$

$$\left(5^3\right)^{2x} = \left(5\right)^{3x+2} \left(5^5\right)^{\frac{1}{2}}$$

$$5^{-6x} = 5^{3x+2} \cdot 5^{5/2}$$

$$5^{-6x} = 5^{3x+2 + \frac{5}{2}}$$

$$\cancel{5}^{-6x} = \cancel{5}^{3x + \frac{9}{2}}$$

$$-6x = \textcircled{3x} + \frac{9}{2}$$

$$\frac{\cancel{-9x}}{\cancel{-9}} = \frac{9}{2} \div -9$$

$$x = \frac{9}{2} \cdot \frac{-1}{9}$$

$$x = -\frac{9}{18} = -\frac{1}{2}$$

Homework

Chapter 7 Review pg. 366-367 (Do all questions)

For $y = c^x$

D: $\{x \mid x \in \mathbb{R}\}$

R: $\{y \mid y > \underline{0}, y \in \mathbb{R}\}$

x int: none

y int: $(0, 1)$

HA: $y = \underline{0}$

For $y = ac^{b(x-h)} + \underline{k}$

D: $\{x \mid x \in \mathbb{R}\}$

R: $\{y \mid y > \underline{k}, y \in \mathbb{R}\}$ (if $a < 0$
then $y < k$)

x int: sub 0 in for y

y int: sub 0 in for x

HA: $y = \underline{k}$

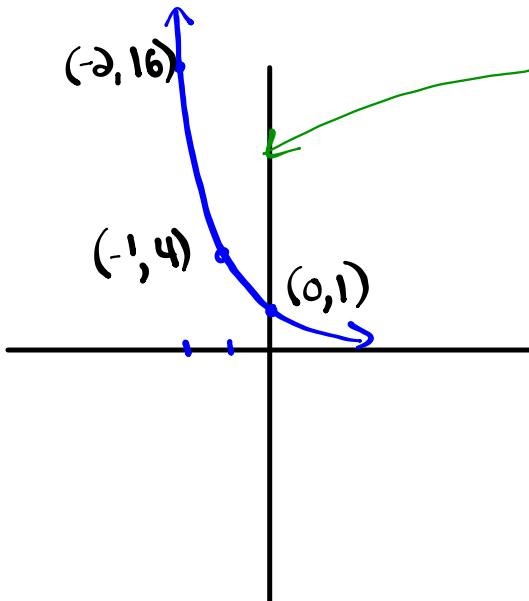
⑥ $\underline{2} = 1.07^x$

$(\underline{1.07})^{10.2} = \underline{1.07}^x$

$10.2 = x$

$\frac{\log 2}{\log 1.07} = \frac{10.2}{\text{exp}}$
Base

③



x	y
-2	16
-1	4
0	1

Red arrows point from the y-values 16, 4, and 1 to the fraction $\frac{1}{4}$ on the right.

$y = (\frac{1}{4})^x$

$$\textcircled{11} \text{ b) } 2^{x-2} = \underline{3}^{x+1}$$

$$2^{x-2} = (2)^{1.58x+1}$$

$$2^{x-2} = 2^{1.58x+1.58}$$

$$x-2 = 1.58x + 1.58$$

$$-2 - 1.58 = 1.58x - x$$

$$\frac{-3.58}{0.58} = \frac{0.58x}{0.58}$$

$$\boxed{-6.17 = x}$$

$$\frac{\log 3}{\log 2} = 1.58$$

↑ Base
 ↑ exp

⑫ $Ni-65$ half-life of 2.5 h

$$\text{Base} = \frac{1}{2}$$

$$\text{exp} = \frac{t}{2.5}$$

$$A_f = A_0 \left(\frac{1}{2} \right)^{\frac{t}{2.5}}$$

Initial Amount = A_0

$$y = a(c)^{b(x-h)} + k$$
$$(x, y) \rightarrow \left[\frac{1}{b}x + h, ay + k \right]$$
$$y = \text{Initial Amount}(\text{Base})^{\text{exp.}}$$

Finding a common base

$$\frac{\log(\text{have})}{\log(\text{want})} = \text{exp.}$$

Base

Ex:

$$\sqrt{27} \cdot 9^x = 81^{5x-4} \div \left(\frac{1}{3}\right)^x$$

$$27^{1/2} \cdot 9^x = 81^{5x-4} \div \left(\frac{1}{3}\right)^x$$

$$(3^3)^{1/2} \cdot (3^2)^x = (3^4)^{5x-4} \div (3^{-1})^x$$

$$3^{3/2} \cdot 3^{2x} = 3^{20x-16} \div 3^{-x} \quad \begin{array}{l} 20x-16 - (-x) \\ 20x-16+x \end{array}$$

$$\cancel{3}^{2x+3/2} = \cancel{3}^{21x-16}$$

$$2x+3/2 = 21x-16$$

$$\frac{3}{2} + \frac{16}{1} = 21x - 2x$$

$$\frac{3}{2} + \frac{32}{2} = 19x$$

$$\frac{35}{2} = \frac{19x}{19}$$

$$\frac{35}{2} \times \frac{1}{19} = x$$

$$\boxed{\frac{35}{38} = x}$$

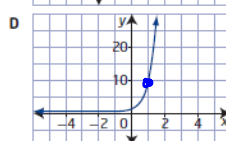
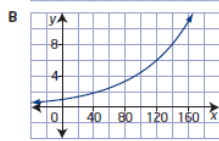
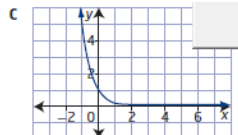
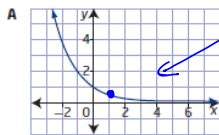
7.1 Characteristics of Exponential Functions, pages 334-345

1. Match each item in set A with its graph from set B.

Set A

- a) The population of a country, in millions, grows at a rate of 1.5% per year. (Increasing) B
- b) $y = 10^x$ (Increasing) D
- c) Tungsten-187 is a radioactive isotope that has a half-life of 1 day. (Decreasing) A
- d) $y = 0.2^x$ (Decreasing) C

Set B



③ (x, y)

-2, 16	>	4	$y = c^x$ (Find c)
-1, 4	>	4	
0, 1	>	4	

$y = (\frac{1}{4})^x$

$$16 \left| \begin{array}{c} (\frac{1}{4})^{-2} \\ 4^2 \\ 16 \end{array} \right. \checkmark$$

⑤ $y = -2(4)^{3(x-1)} + 2$ $a = -2$ $b = 3$ $h = 1$ $k = 2$

$y = 4^x$ $(x, y) \rightarrow (\frac{1}{3}x + 1, -2y + 2)$

x	y
-2	$\frac{1}{16}$
-1	$\frac{1}{4}$
0	1
1	4
2	16

x	y
$\frac{1}{3}$	$\frac{15}{8}$
$\frac{2}{3}$	$\frac{3}{2}$
1	0
$\frac{4}{3}$	-6
$\frac{5}{3}$	-20

$$\textcircled{9} \text{ c) } \left(\sqrt[3]{216} \right)^5$$

$$(216^{1/3})^5$$

$$(216)^{5/3}$$

$$\frac{\log 216}{\log 6} = 3$$

$$(6^3)^{5/3}$$

$$6^5$$

$$y = c^x$$

$$16 = c^{-2}$$

$$16 = \left(\frac{1}{c}\right)^2$$

$$16 = \frac{1}{c^2}$$

$$16c^2 = 1$$

$$c^2 = \frac{1}{16}$$

$$c = \frac{1}{4}$$