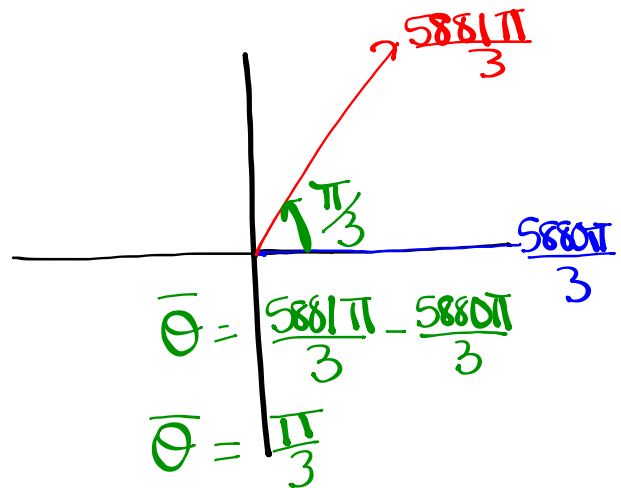


Sketch the following and determine a negative angle co-terminal with:

$$(i) \frac{5881\pi}{3}$$

$$\frac{5880\pi}{3}, \frac{5881\pi}{3}, \frac{5882\pi}{3}$$

$$1960\pi$$



Negative coterminal angle:

$$\frac{5881\pi}{3} - \frac{1962\pi}{1}$$

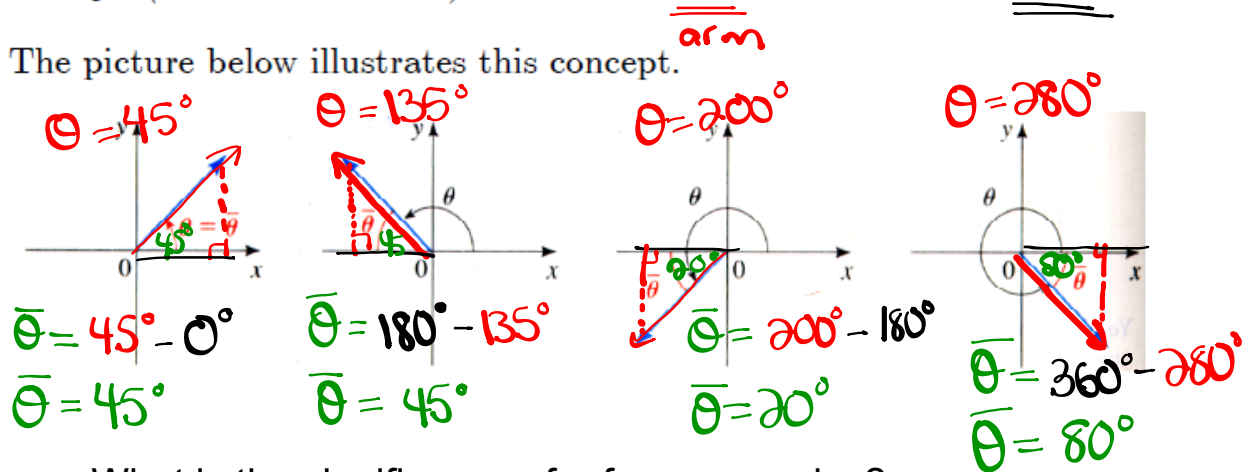
$$\frac{5881\pi}{3} - \frac{5886\pi}{3}$$

$$\frac{-5\pi}{3}$$

Reference Triangles:

Definition 17 The reference angle $\bar{\theta}$ of an angle θ in standard position is the acute angle (between 0 and 90°) the terminal side makes with the x-axis.

The picture below illustrates this concept.



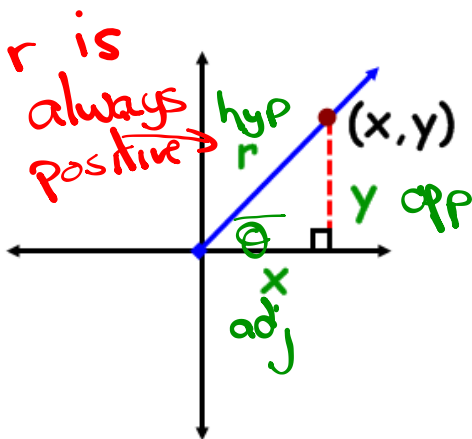
What is the significance of reference angles?

Angles on the Cartesian Plane

$< 90^\circ$ or $< \pi/2$ or $< 1.57 \text{ rads}$

- **Reference Angle** - an acute angle formed between the terminal arm and the x-axis.

- **Reference Triangle** - a triangle formed by drawing a perpendicular line from a point on the terminal to the x-axis.



Notice what will happen if the rotation moves into other quadrants?

TRIG RATIOS on the CARTESIAN PLANE

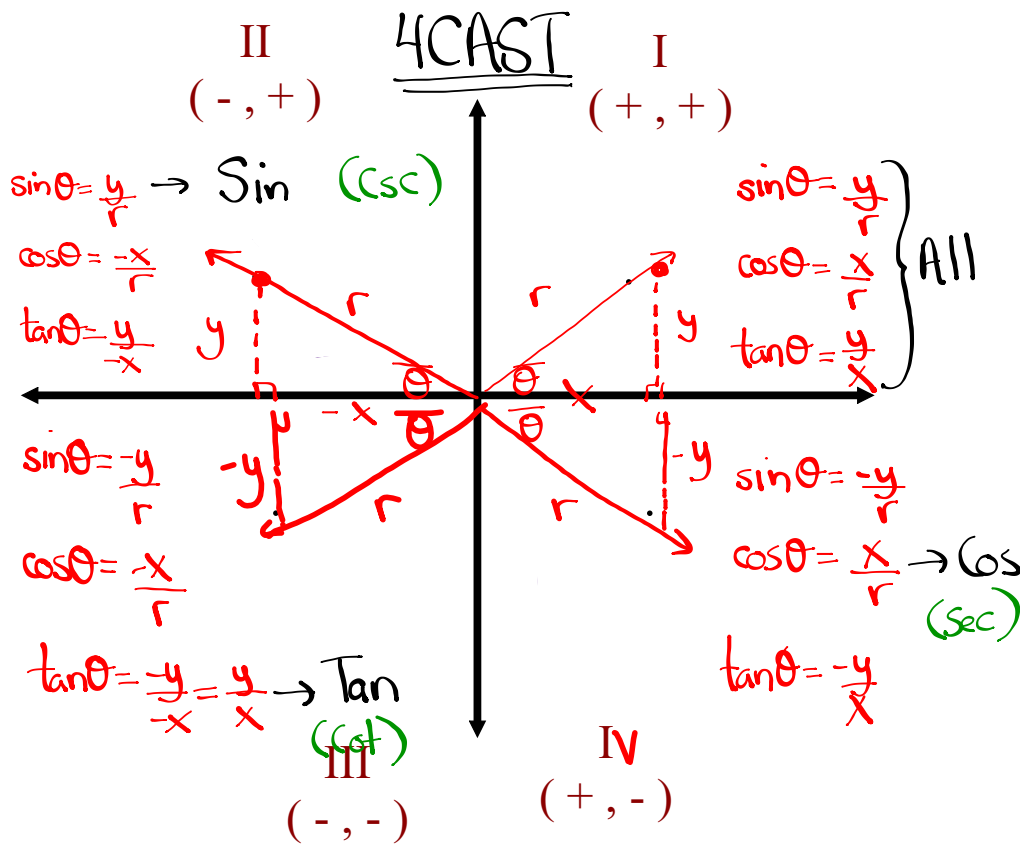
$\sin \theta = \frac{y}{r} = \frac{o}{h}$	$\csc \theta = \frac{r}{y} = \frac{h}{o}$
$\cos \theta = \frac{x}{r} = \frac{a}{h}$	$\sec \theta = \frac{r}{x} = \frac{h}{a}$
$\tan \theta = \frac{y}{x} = \frac{o}{a}$	$\cot \theta = \frac{x}{y} = \frac{a}{o}$

}
"Primary"

}
"Reciprocal"

TRIG RATIOS IN ALL 4 QUADRANTS

What primary trig ratios are **POSITIVE** in...



Where is θ if...

$$\csc \theta < 0$$

$$\sin \theta < 0 \text{ \& \; } \tan \theta < 0$$

$$\csc \theta > 0 \text{ \& \; } \cot \theta < 0$$

Homework

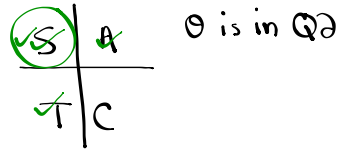
If $\sec\theta = -\sqrt{10}$ and $\sin\theta > 0$, determine the value of $\csc\theta$

$$\sec\theta = \frac{r}{x} = \frac{\text{hyp}}{\text{adj}} = \frac{r}{x}$$

$$r = \sqrt{10} \text{ (Always +)}$$

$$x = -1$$

① Determine what quadrant:
 $\sec\theta < 0$ + $\sin\theta > 0$
 or $\cos\theta < 0$ + $\sin\theta > 0$

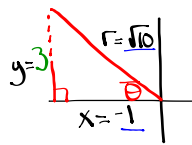


④ Find $\csc\theta$:

$$\csc\theta = \frac{r}{y}$$

$$\csc\theta = \frac{\sqrt{10}}{3}$$

② Draw a diagram



$$\textcircled{3} \quad x^2 + y^2 = r^2$$

$$(-1)^2 + y^2 = (\sqrt{10})^2$$

$$1 + y^2 = 10$$

$$y^2 = 9$$

$$y = \pm 3$$

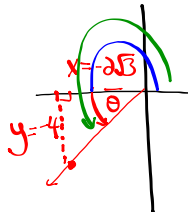
$$y = 3 \text{ (Q2)}$$

Determine the measure (in radians) of an angle whose terminal arm passes through the ordered pair $(-2\sqrt{3}, -4)$

$$x = -2\sqrt{3}$$

$$y = -4$$

① Draw a diagram



② Find $\bar{\theta}$

$$\tan\bar{\theta} = \frac{y}{x}$$

$$\tan\bar{\theta} = \frac{-4}{-2\sqrt{3}} = \frac{2}{\sqrt{3}}$$

$$\tan\bar{\theta} = 1.1547$$

$$\bar{\theta} = \tan^{-1}(1.1547)$$

convert calculator to radians

$$\bar{\theta} = 0.86 \text{ rads}$$

③ Find θ

$$\theta = \pi + \bar{\theta}$$

$$\theta = 3.14 + 0.86$$

$$\theta = 4 \text{ rads}$$

$$\theta = \pi - \bar{\theta}$$

$$\theta = 180^\circ - \bar{\theta}$$

$$\theta = 180^\circ + \bar{\theta}$$

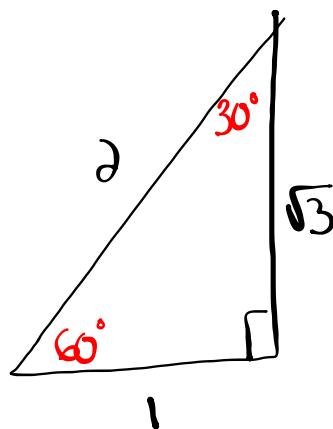
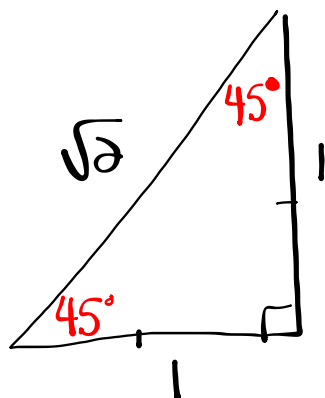
$$\theta = \pi + \bar{\theta}$$

$$\theta = \bar{\theta}$$

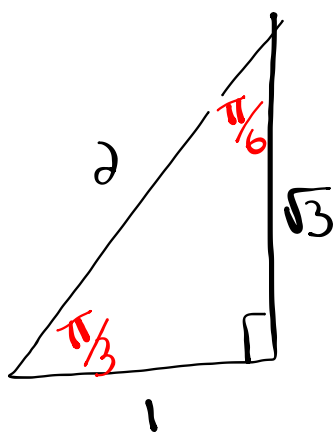
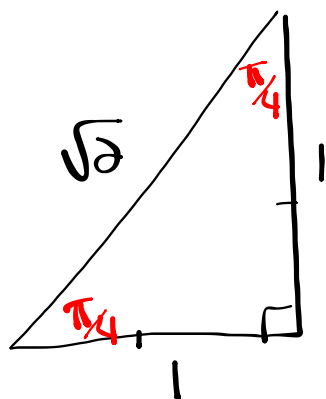
$$\theta = 360^\circ - \bar{\theta}$$

$$\theta = 2\pi - \bar{\theta}$$

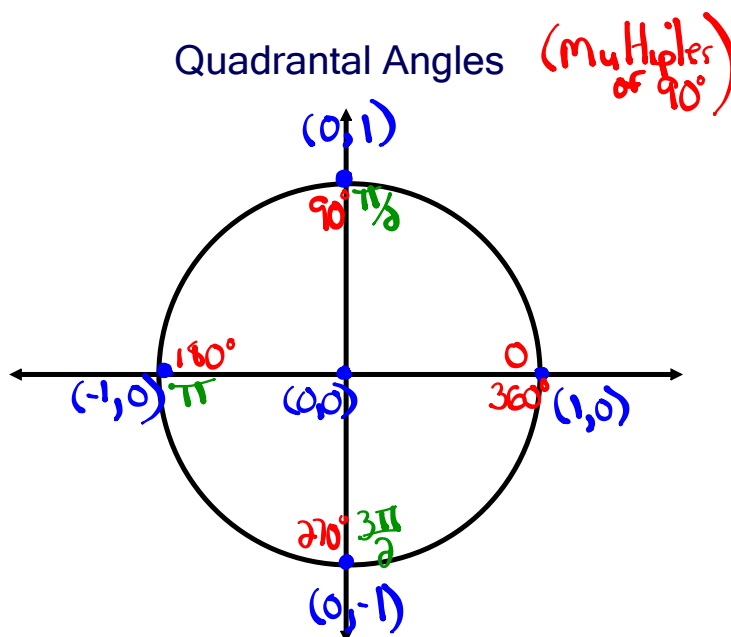
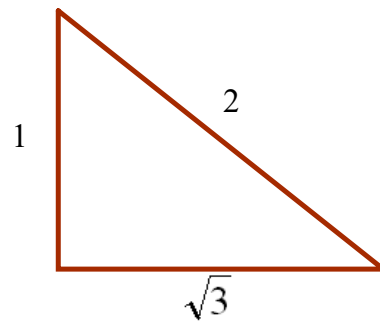
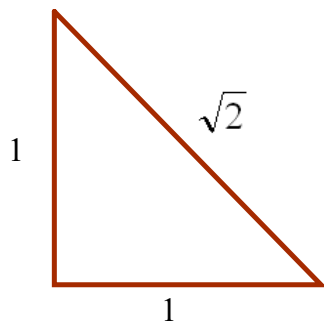
In Degrees



In Radians



Special Angles (in radians)



- The Unit Circle
- Center is @ $(0,0)$
 - radius is 1 unit

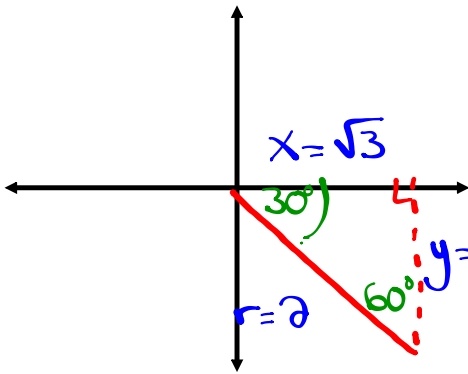
Solving Trig Expressions by Sketching

Angles

Ex. Evaluate $\sin 690^\circ$
the

Optional

(i) Find principal angle:
 $\theta = 690^\circ - 360^\circ = 330^\circ$



(ii) Sketch (Q4)

(iii) Find $\bar{\theta}$

$$\bar{\theta} = 360^\circ - 330^\circ = 30^\circ$$

(iv) Label

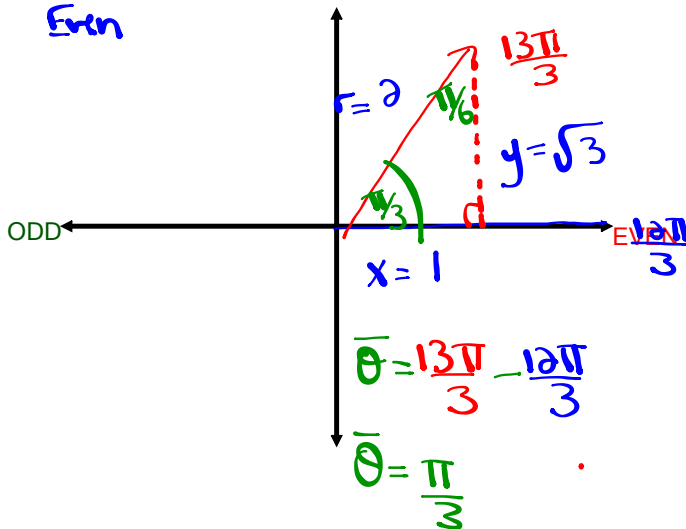
(v) Evaluate

$$\sin 690^\circ = -\frac{1}{2}$$

Ex. $\cos \frac{13\pi}{3} = \frac{2}{5} = \frac{x}{r} = \frac{1}{2}$

$\frac{12\pi}{3}$ $\frac{13\pi}{3}$ $\frac{14\pi}{3}$

4π
Even

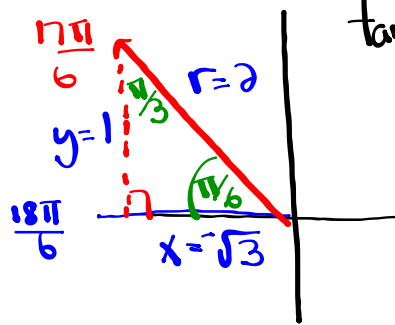


Homework

Evaluate each Trig Expression (provide a sketch of each angle)

1. $\tan \frac{17\pi}{6} = -\frac{1}{\sqrt{3}}$ 2. $\sin \frac{15\pi}{4} = -\frac{1}{\sqrt{2}}$ 3. $\cos\left(-\frac{21\pi}{4}\right) = \frac{-1}{\sqrt{2}}$

① $\frac{16\pi}{6}$ $\frac{17\pi}{6}$ $\frac{18\pi}{6}$
 3π
 (odd)

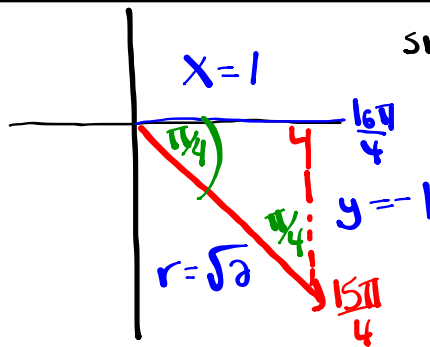


$$\tan \frac{17\pi}{6} = \frac{y}{x} = \frac{1}{-\sqrt{3}} = -\frac{1}{\sqrt{3}}$$

$$= -\frac{1 \cdot \sqrt{3}}{\sqrt{3} \cdot \sqrt{3}}$$

$\tan \frac{17\pi}{6} = -\frac{\sqrt{3}}{3}$

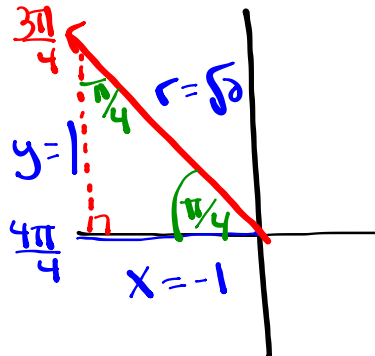
② $\frac{14\pi}{4}$ $\frac{15\pi}{4}$ $\frac{16\pi}{4}$
 4π
 (Even)



$$\sin \frac{15\pi}{4} = \frac{y}{r} = \frac{-1}{\sqrt{2}}$$

$\sin \frac{15\pi}{4} = -\frac{\sqrt{2}}{2}$

③ $-\frac{21\pi}{4} + \frac{6\pi}{1}$
 $-\frac{21\pi}{4} + \frac{24\pi}{4}$
 $\frac{3\pi}{4}$



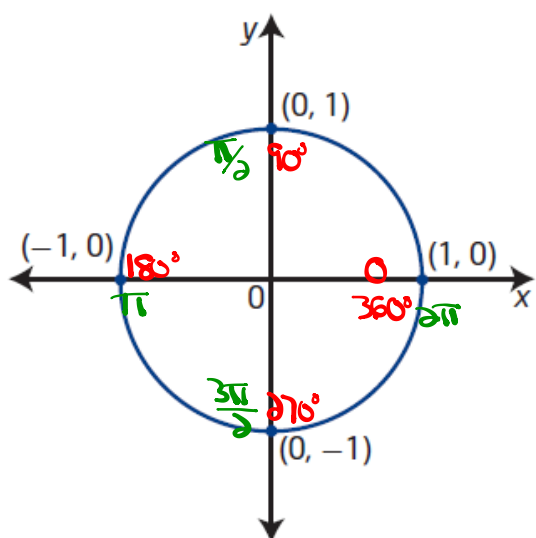
$$\cos\left(-\frac{21\pi}{4}\right) = \cos \frac{3\pi}{4} = \frac{a}{h} = \frac{x}{r}$$

$$= -\frac{1 \cdot \sqrt{2}}{\sqrt{2} \cdot \sqrt{2}}$$

$\frac{2\pi}{4}$ $\frac{3\pi}{4}$ $\frac{4\pi}{4}$
 π
 (odd)

$\cos\left(-\frac{21\pi}{4}\right) = -\frac{\sqrt{2}}{2}$

Unit Circle



unit circle

- a circle with radius 1 unit ($r = 1$)
- a circle of radius 1 unit with centre at the $(0,0)$ origin on the Cartesian plane is known as the unit circle

$$\sin \theta = \frac{y}{r} = \frac{y}{1} = y \quad \rightarrow \quad \text{Ex: } \sin 90^\circ = 1$$

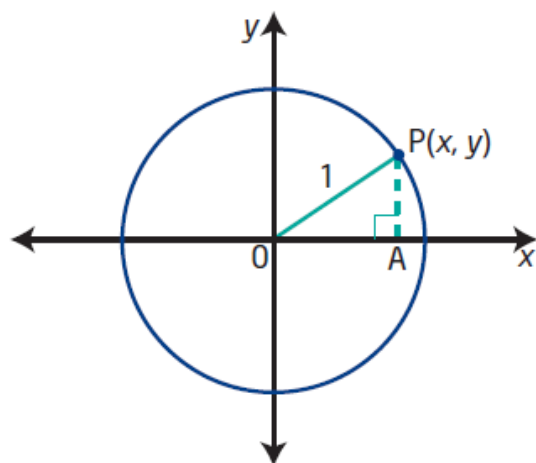
$$\cos \theta = \frac{x}{r} = \frac{x}{1} = x \quad \rightarrow \quad \text{Ex: } \cos \pi = -1$$

$$\tan \theta = \frac{y}{x} \quad \rightarrow \quad \text{Ex: } \tan 270^\circ = \frac{-1}{0} = \text{undefined}$$

$$\csc \theta = \frac{1}{y} \quad \rightarrow \quad \text{Ex: } \csc 360^\circ = \frac{1}{0} = \text{undefined}$$

$$\sec \theta = \frac{1}{x} \quad \rightarrow \quad \text{Ex: } \sec 5\pi = \frac{1}{-1} = -1$$

$$\cot \theta = \frac{x}{y} \quad \rightarrow \quad \text{Ex: } \cot \frac{3\pi}{2} = \frac{0}{-1} = 0$$



$$x^2 + y^2 = r^2$$

$$x^2 + y^2 = (1)^2$$

The equation of the unit circle is $x^2 + y^2 = 1$.

$$r=1$$

Determine the equation of a circle with centre at the origin and radius 6.

$$\underline{r=6}$$

$$x^2 + y^2 = r^2$$

$$x^2 + y^2 = (6)^2$$

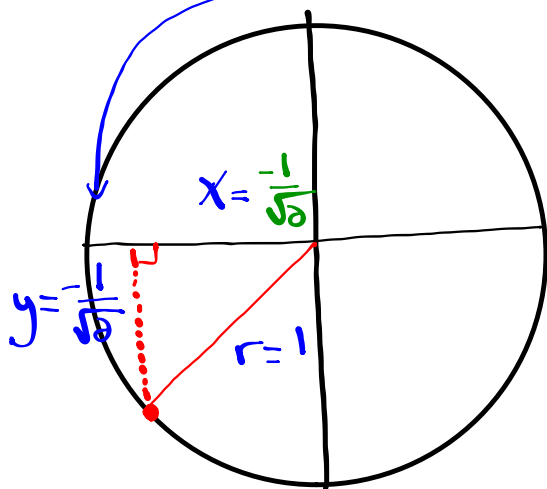
$$\boxed{x^2 + y^2 = 36}$$

Problems Involving the Unit Circle:

Determine Coordinates for Points of the Unit Circle

Determine the coordinates (x, y) for all points on the unit circle $r=1$ that satisfy the conditions given. Draw a diagram in each case.

- the y-coordinate is $-\frac{1}{\sqrt{2}}$ and the point is in quadrant III



Find x

$$x^2 + y^2 = r^2$$

$$x^2 + \left(\frac{-1}{\sqrt{2}}\right)^2 = (1)^2$$

$$x^2 + \frac{1}{2} = 1$$

$$x^2 = 1 - \frac{1}{2}$$

$$x^2 = \frac{2}{2} - \frac{1}{2}$$

$$x^2 = \frac{1}{2}$$

$$x = \pm \frac{\sqrt{1}}{\sqrt{2}}$$

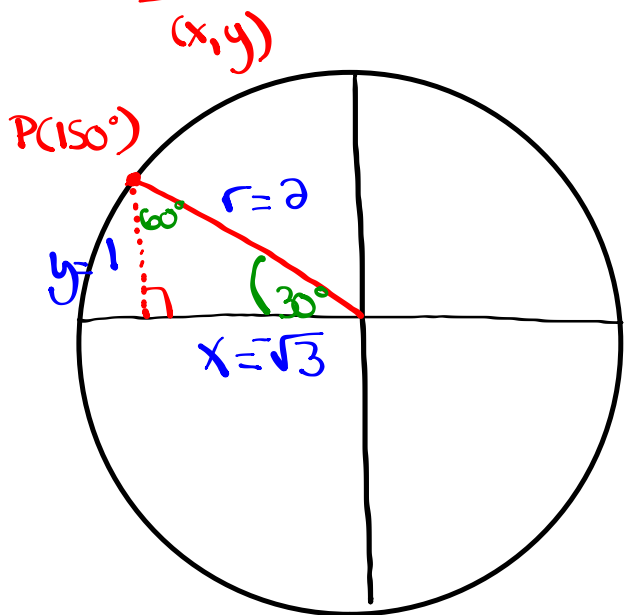
$$x = \pm \frac{1}{\sqrt{2}}$$

$$x = -\frac{1}{\sqrt{2}} \quad (\text{Q3})$$

coordinates are $\left(-\frac{1}{\sqrt{2}}, -\frac{1}{\sqrt{2}}\right)$

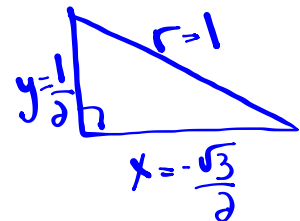
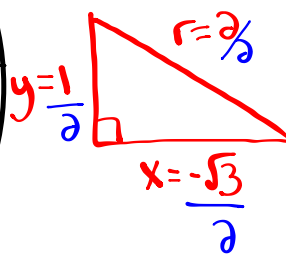
Problems Involving the Unit Circle:

If $P(150^\circ)$ is the point at which the terminal arm of an angle θ in standard position intersects the unit circle, determine the exact coordinates of...



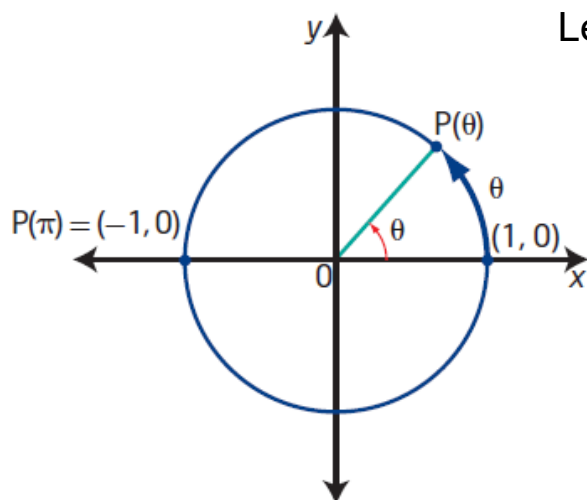
$$r=1$$

Scale the diagram so that $r=1$ (unit circle)



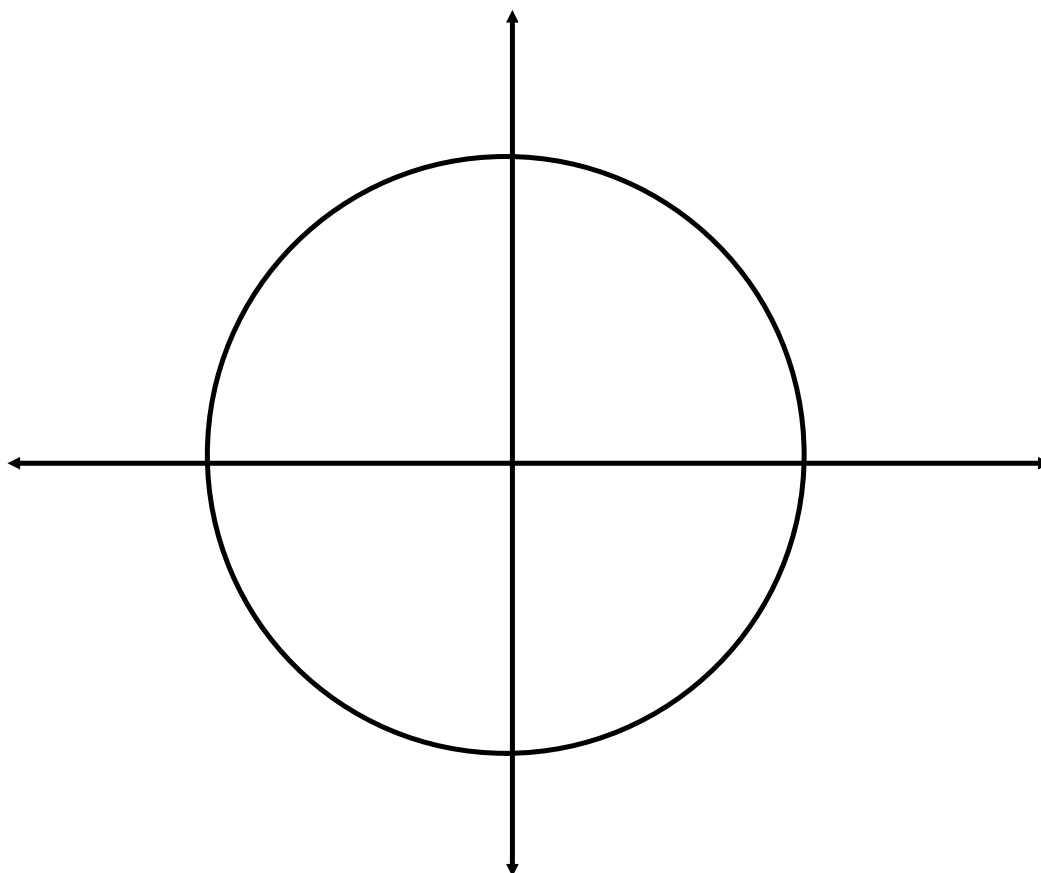
coordinates are $(\frac{\sqrt{3}}{2}, \frac{1}{2})$

Special Angles on the Unit Circle:

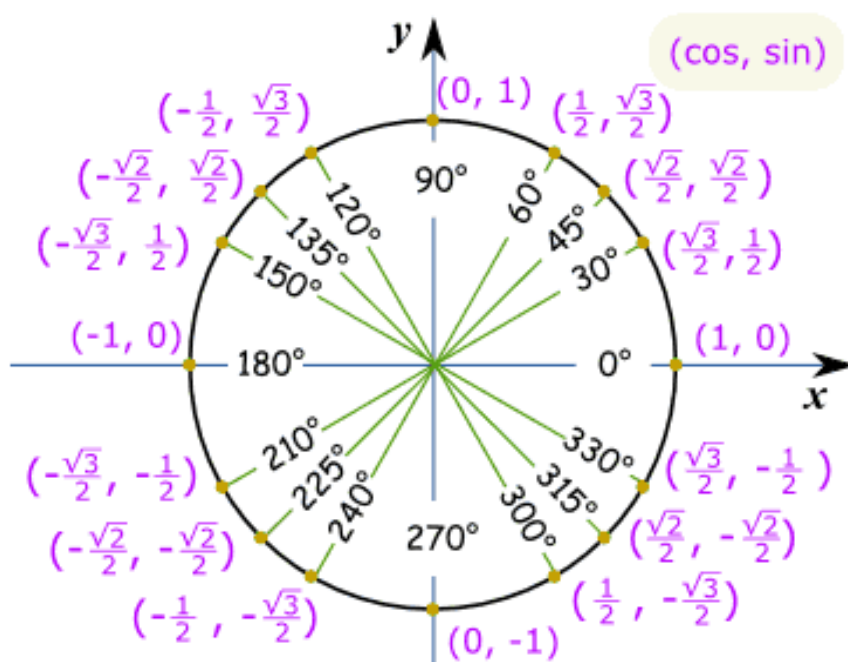


Let's use $\frac{\pi}{4}$ as our reference angle

Construct reference triangles
for all multiples of $\pi/4$
between 0 and 2π

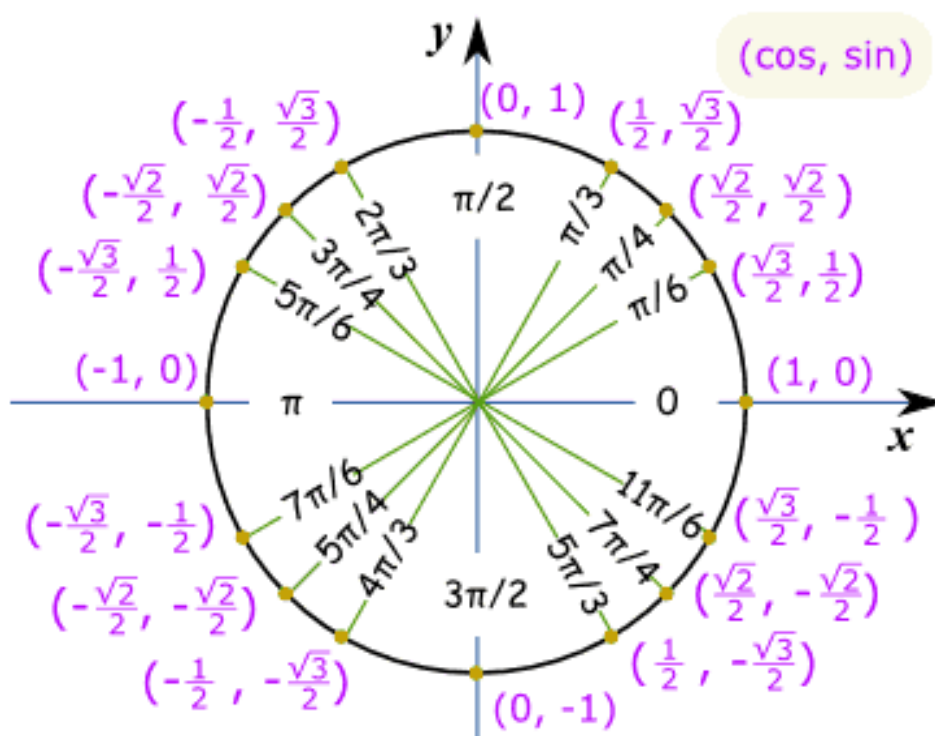


Unit Circle of Special Angles in Degrees



This is lovely...so what is it used for????

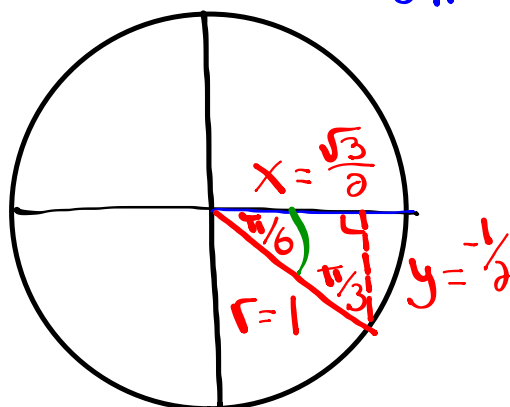
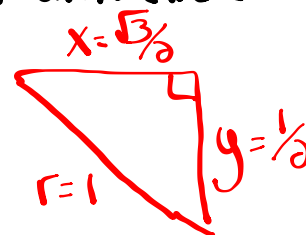
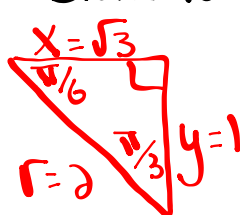
Unit Circle of Special Angles in Radians



Questions from Homework

① c) $\frac{10\pi}{6}, \frac{11\pi}{6}, \frac{12\pi}{6}$
 2π

Scale to fit unit circle



Coordinates are:
 $(\frac{\sqrt{3}}{2}, -\frac{1}{2})$

$$\bar{\theta} = \frac{12\pi}{6} - \frac{11\pi}{6}$$

$$\bar{\theta} = \frac{\pi}{6}$$

Questions from Homework

③ If $\csc \theta = -\frac{\sqrt{10}}{2}$ and $\tan \theta > 0$ determine the value of the 5 remaining trig ratios as radicals in simplest form.

Given:

$$\csc \theta = -\frac{\sqrt{10}}{2} = \frac{h}{o} = \frac{r}{y}$$

$$r = \sqrt{10} \quad (r \text{ is always positive})$$

$$y = -2$$

④ Find the 5 trig ratios

$$\sin \theta = \frac{-2}{\sqrt{10}} = \frac{-2\sqrt{10}}{10} = -\frac{\sqrt{10}}{5}$$

$$\cos \theta = \frac{-\sqrt{6}}{\sqrt{10}} = \frac{-\sqrt{60}}{10} = \frac{-2\sqrt{15}}{10} = -\frac{\sqrt{15}}{5}$$

$$\tan \theta = \frac{-2}{-\sqrt{6}} = \frac{2\sqrt{6}}{6} = \frac{\sqrt{6}}{3}$$

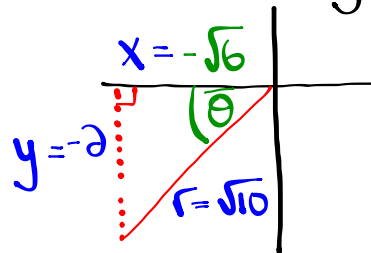
$$\sec \theta = \frac{\sqrt{10}}{\sqrt{6}} = \frac{\sqrt{60}}{6} = \frac{2\sqrt{15}}{6} = \frac{\sqrt{15}}{3}$$

$$\cot \theta = \frac{-\sqrt{6}}{-2} = \frac{\sqrt{6}}{2}$$

① Determine what quadrant $\csc < 0 + \tan > 0$

S	A	Quad 3
T	C	

② Draw a diagram:



③ Find the missing side:

$$x^2 + y^2 = r^2$$

$$x^2 + (-2)^2 = (\sqrt{10})^2$$

$$x^2 + 4 = 10$$

$$x^2 = 6$$

$$x = \pm\sqrt{6}$$

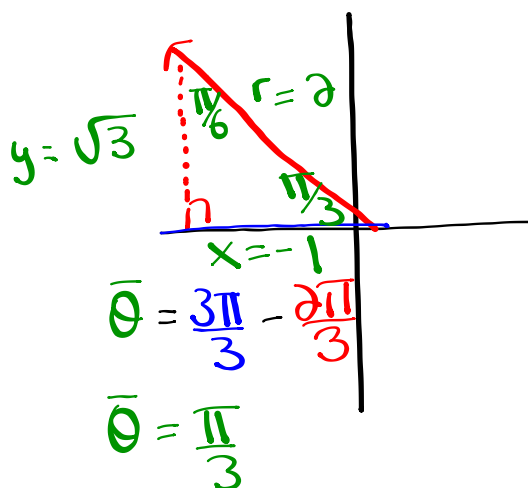
$$\underline{x = -\sqrt{6}} \quad (\text{Quad 3})$$

Questions from Homework

$$\textcircled{4} \quad b) \quad \sec \frac{2\pi}{3} = \frac{2}{1} = -2$$

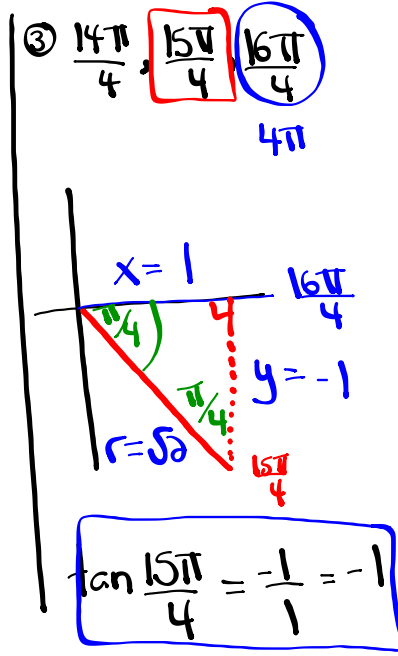
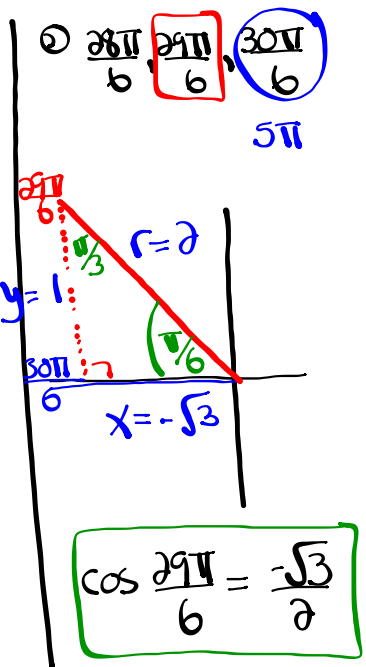
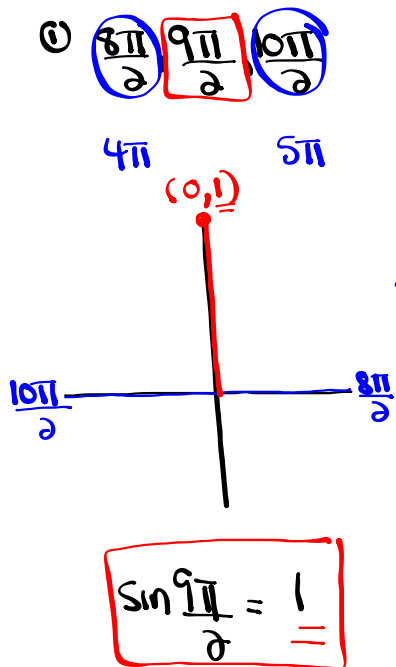
$$\frac{1\pi}{3}, \frac{2\pi}{3}, \frac{3\pi}{3}$$

1π



Evaluate without the use of a calculator:

$$\sin \frac{9\pi}{2} - \cos^2 \left(\frac{29\pi}{6} \right) \tan \left(\frac{15\pi}{4} \right)$$



$$\sin \frac{9\pi}{2} - \cos^2 \left(\frac{29\pi}{6} \right) \tan \left(\frac{15\pi}{4} \right)$$

$$(1) - \left(\frac{-\sqrt{3}}{2} \right)^2 (-1)$$

$$1 - \frac{3}{4} (-1)$$

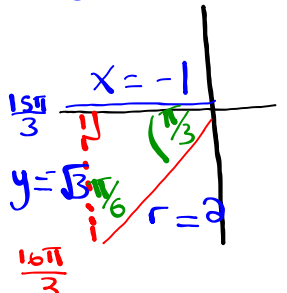
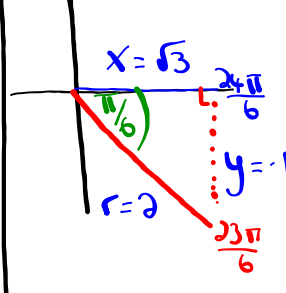
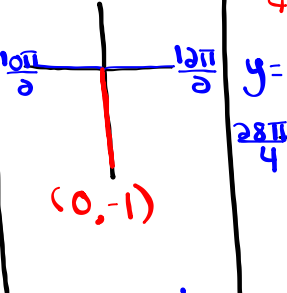
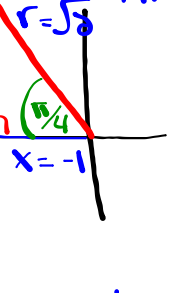
$$1 + \frac{3}{4}$$

$$\frac{4}{4} + \frac{3}{4}$$

$$\frac{7}{4}$$

Evaluate without the use of a calculator:

$$\cos\left(\frac{16\pi}{3}\right) \tan^2\left(\frac{23\pi}{6}\right) + \csc\left(\frac{11\pi}{2}\right) + \sin^2\left(\frac{27\pi}{4}\right)$$

<p>$\frac{15\pi}{3}, \frac{16\pi}{3}, \frac{17\pi}{3}$</p> <p>Sin</p>  <p>$\cos \frac{16\pi}{3} = \frac{-1}{2} \times \frac{x}{r}$</p>	<p>$\frac{22\pi}{6}, \frac{23\pi}{6}, \frac{24\pi}{6}$</p> <p>4π</p>  <p>$\tan \frac{23\pi}{6} = \frac{-1}{\sqrt{3}} \times \frac{y}{x}$</p>	<p>$\frac{10\pi}{2}, \frac{11\pi}{2}, \frac{12\pi}{2}$</p> <p>5π 6π</p>  <p>$\csc \frac{11\pi}{2} = \frac{1}{-1} \times \frac{r}{y}$</p> <p>$\csc \frac{11\pi}{2} = -1$</p>	<p>$\frac{26\pi}{4}, \frac{27\pi}{4}, \frac{28\pi}{4}$</p> <p>7π</p>  <p>$\sin \frac{27\pi}{4} = \frac{1}{\sqrt{2}} \times \frac{y}{r}$</p>
---	---	---	--

$$\cos\left(\frac{16\pi}{3}\right) \tan^2\left(\frac{23\pi}{6}\right) + \csc\left(\frac{11\pi}{2}\right) + \sin^2\left(\frac{27\pi}{4}\right)$$

$$\left(\frac{-1}{2}\right) \left(\frac{-1}{\sqrt{3}}\right)^2 + (-1) + \left(\frac{1}{\sqrt{2}}\right)^2$$

$$\left(\frac{-1}{2}\right) \left(\frac{1}{3}\right) - 1 + \frac{1}{2}$$

$$-\frac{1}{6} - \frac{6}{6} + \frac{3}{6}$$

$$\frac{-4}{6}$$

$$\frac{-2}{3}$$

Homework:

Worksheet - Sketching Angles in Radians.doc

Solutions...

1. $-\frac{5}{3}$

5. $\frac{4+3\sqrt{3}}{6}$

2. $\frac{-\sqrt{6}}{3}$

6. $\frac{-10}{3}$

3. $-2-\sqrt{3}$

7. 0

4. $\frac{-5}{3}$

8. $\frac{3+3\sqrt{3}}{-2}$

Attachments

Worksheet - Sketching Angles in Radians.doc