

Questions from homework

$$\textcircled{4} \text{ f) } h(x) = \frac{x-1}{x+1}$$

$$h'(x) = \frac{(x+1)(1) - (x-1)(1)}{(x+1)^2}$$

$$h'(x) = \frac{x+1-x+1}{(x+1)^2}$$

$$h'(x) = \frac{2}{(x+1)^2}$$

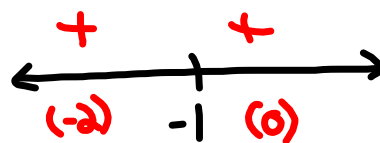
Critical Values:

$$(x+1)^2 = 0$$

$$x+1 = 0$$

$$x = -1$$

Make Number Line:



Increasing on $(-\infty, \infty)$

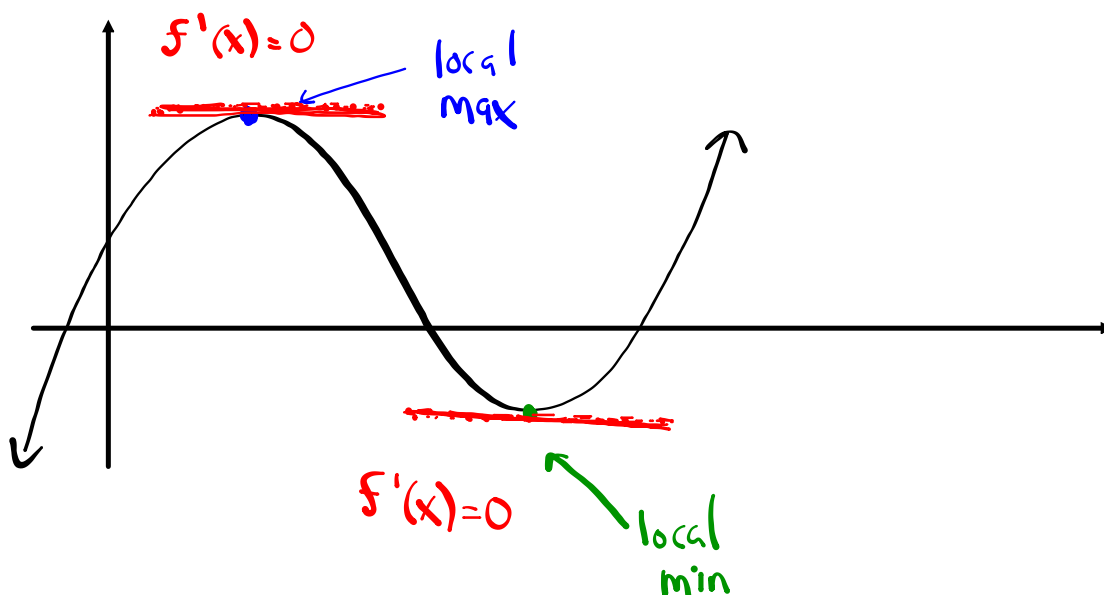
The First Derivative Test

If f has a local maximum or minimum at c , then c must be a critical value of f (Fermat's Theorem), but not all critical numbers give rise to a maximum or minimum. For instance, recall that 0 is a critical number of the function $y = x^3$ but this function has no maximum or minimum at a critical number.

One way of solving this is suggested by the figure below.

If f is increasing to the left of a critical number c and decreasing to the right of c , then f has a local max at c .

If f is decreasing to the left of a critical number c and increasing to the right of c , then f has a local min at c .



The First Derivative Test

Let c be a critical number of a continuous function f .

1. If $f'(x)$ changes from positive to negative at c , then f has a local max at c .
2. If $f'(x)$ changes from negative to positive at c , then f has a local min at c .
3. If $f'(x)$ does not change signs at c , then f has no max or min at c .

Example 1

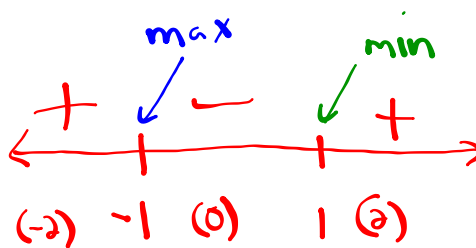
Find the local maximum and minimum values of

$$f(x) = x^3 - 3x + 1$$

$$f'(x) = 3x^2 - 3$$

$$f'(x) = 3(x^2 - 1)$$

$$f'(x) = 3(x+1)(x-1)$$



$$\text{CV: } f'(x) = 0$$

$$3 \neq 0 \quad \left| \quad \begin{array}{l} x+1=0 \\ x=-1 \end{array} \quad \left| \quad \begin{array}{l} x-1=0 \\ x=1 \end{array} \right.$$

Increasing on $(-\infty, -1) + (1, \infty)$
 $x < -1$ + $x > 1$

Decreasing on $(-1, 1)$
 $-1 < x < 1$

$$\text{CV: } x = \pm 1$$

max occurs @ $x = -1$

$$f(x) = x^3 - 3x + 1$$

$$f(-1) = (-1)^3 - 3(-1) + 1$$

$$f(-1) = -1 + 3 + 1$$

$$f(-1) = 3$$

$(-1, 3)$ max

min occurs @ $x = 1$

$$f(x) = x^3 - 3x + 1$$

$$f(1) = (1)^3 - 3(1) + 1$$

$$f(1) = 1 - 3 + 1$$

$$f(1) = -1$$

$(1, -1)$ min

Example 2

Find the local maximum and minimum values of $g(x) = x^4 - 4x^3 - 8x^2 - 1$. Use this information to sketch the graph of g .

$$g'(x) = 4x^3 - 12x^2 - 16x$$

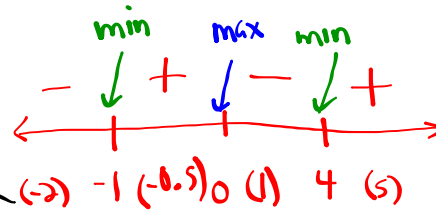
$$g'(x) = 4x(x^2 - 3x - 4)$$

$$g'(x) = 4x(x-4)(x+1)$$

$$\text{cv: } f'(x) = 0$$

$$\begin{array}{l|l|l} 4x = 0 & x - 4 = 0 & x + 1 \\ \hline x = 0 & x = 4 & x = -1 \end{array}$$

$$\text{cv: } x = -1, 0, 4$$



Increasing on $(-1, 0) + (4, \infty)$

Decreasing on $(-\infty, -1) + (0, 4)$

$$g(x) = x^4 - 4x^3 - 8x^2 - 1$$

$$g(-1) = (-1)^4 - 4(-1)^3 - 8(-1)^2 - 1$$

$$g(-1) = 1 + 4 - 8 - 1$$

$$g(-1) = -4$$

local min @ $(-1, -4)$

$$g(x) = x^4 - 4x^3 - 8x^2 - 1$$

$$g(4) = (4)^4 - 4(4)^3 - 8(4)^2 - 1$$

$$g(4) = 256 - 256 - 128 - 1$$

$$g(4) = -129$$

local min @ $(4, -129)$

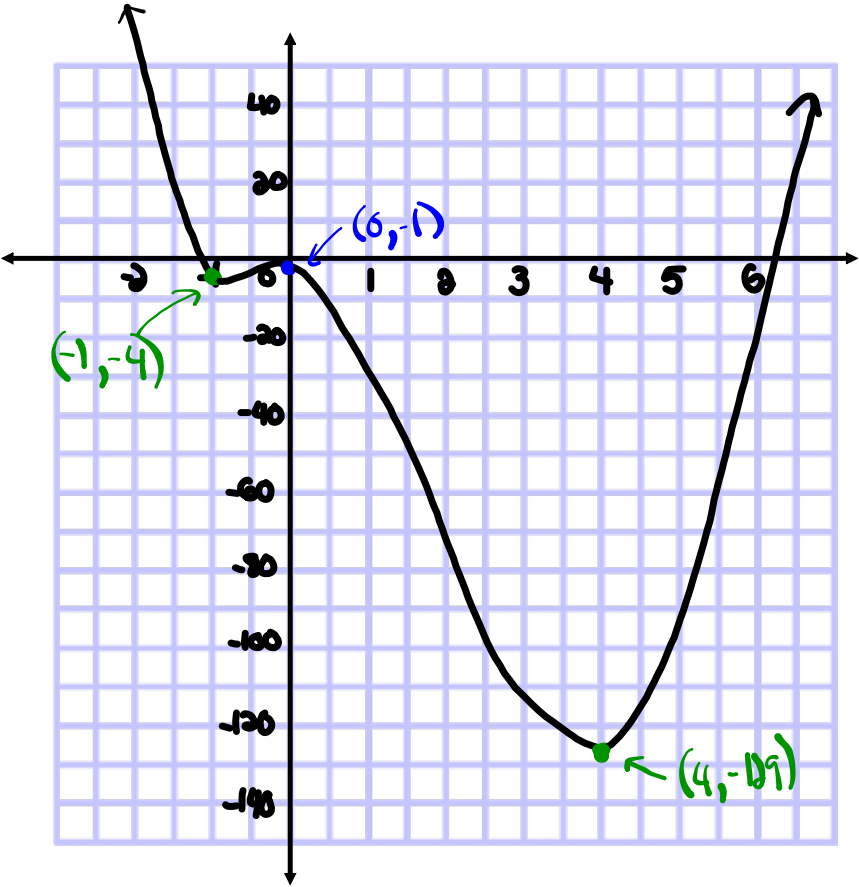
$$g(x) = x^4 - 4x^3 - 8x^2 - 1$$

$$g(0) = (0)^4 - 4(0)^3 - 8(0)^2 - 1$$

$$g(0) = 0 - 0 - 0 - 1$$

$$g(0) = -1$$

local max @ $(0, -1)$



The First Derivative Test

(for absolute extreme values)

Let c be a critical number of a continuous function f .

1. If $f'(x)$ is positive for all $x < c$ and $f'(x)$ is negative for all $x > c$, then $f(c)$ is the absolute maximum value.
2. If $f'(x)$ is negative for all $x < c$ and $f'(x)$ is positive for all $x > c$, then $f(c)$ is the absolute minimum value.

Homework

$$\textcircled{1} \text{a) } f(x) = 3x^2 - 4x + 13$$

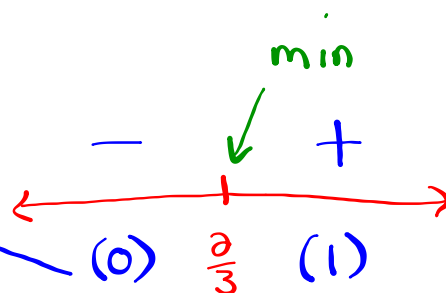
$$f'(x) = 6x - 4$$

$$0 = 6x - 4$$

$$\frac{4}{6} = \frac{6x}{6}$$

$$\frac{2}{3} = x$$

$$\text{CV: } x = \frac{2}{3}$$



Increasing on $(\frac{2}{3}, \infty)$

Decreasing on $(-\infty, \frac{2}{3})$

min @ $x = \frac{2}{3}$

$$f(x) = 3x^2 - 4x + 13$$

$$f\left(\frac{2}{3}\right) = 3\left(\frac{2}{3}\right)^2 - 4\left(\frac{2}{3}\right) + 13$$

$$f\left(\frac{2}{3}\right) = \cancel{3}\left(\frac{4}{\cancel{9}_3}\right) - \frac{8}{3} + 13$$

$$f\left(\frac{2}{3}\right) = \frac{4}{3} - \frac{8}{3} + \frac{39}{3}$$

$$f\left(\frac{2}{3}\right) = \frac{35}{3}$$

$$\left(\frac{2}{3}, \frac{35}{3}\right)$$

$$\textcircled{a} \text{ e) } h(x) = x^4 - 8x^2 + 6$$

$$h'(x) = 4x^3 - 16x$$

$$h'(x) = 4x(x^2 - 4)$$

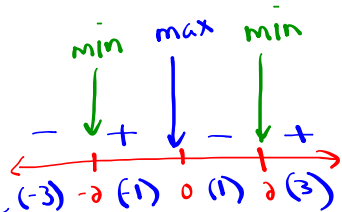
$$h'(x) = 4x(x+2)(x-2)$$

$$0 = 4x(x+2)(x-2)$$

$$\begin{array}{l|l|l} 4x=0 & x+2=0 & x-2=0 \\ x=0 & x=-2 & x=2 \end{array}$$

Increasing on $(-2, 0)$
and $(2, \infty)$

Decreasing on $(-\infty, -2)$
and $(0, 2)$



$$h(x) = x^4 - 8x^2 + 6 \quad (-2, -10) \text{ min}$$

$$h(-2) = (-2)^4 - 8(-2)^2 + 6$$

$$h(-2) = 16 - 32 + 6$$

$$h(-2) = -10$$

$$h(x) = x^4 - 8x^2 + 6 \quad (0, 6) \text{ max}$$

$$h(0) = (0)^4 - 8(0)^2 + 6$$

$$h(0) = 6$$

$$h(x) = x^4 - 8x^2 + 6 \quad (2, -10) \text{ min}$$

$$h(2) = (2)^4 - 8(2)^2 + 6$$

$$h(2) = 16 - 32 + 6$$

$$h(2) = -10$$

