

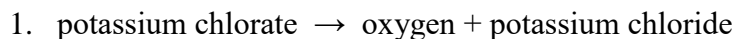
## Science 10 Reaction Review Worksheet

For each of the following:

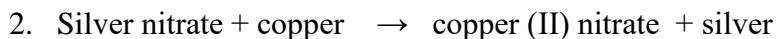
A. Identify the type of Reaction

B. Write skeleton equations

C. Balance the skeletal equations



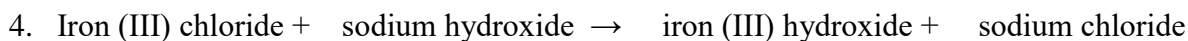
Type of reaction: \_\_\_\_\_



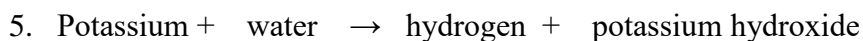
Type of reaction: \_\_\_\_\_



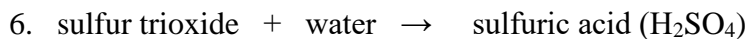
Type of reaction: \_\_\_\_\_



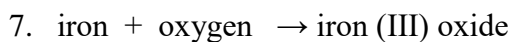
Type of reaction: \_\_\_\_\_



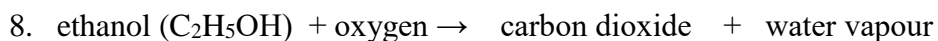
Type of reaction: \_\_\_\_\_



Type of reaction: \_\_\_\_\_



Type of reaction: \_\_\_\_\_



Type of reaction: \_\_\_\_\_